

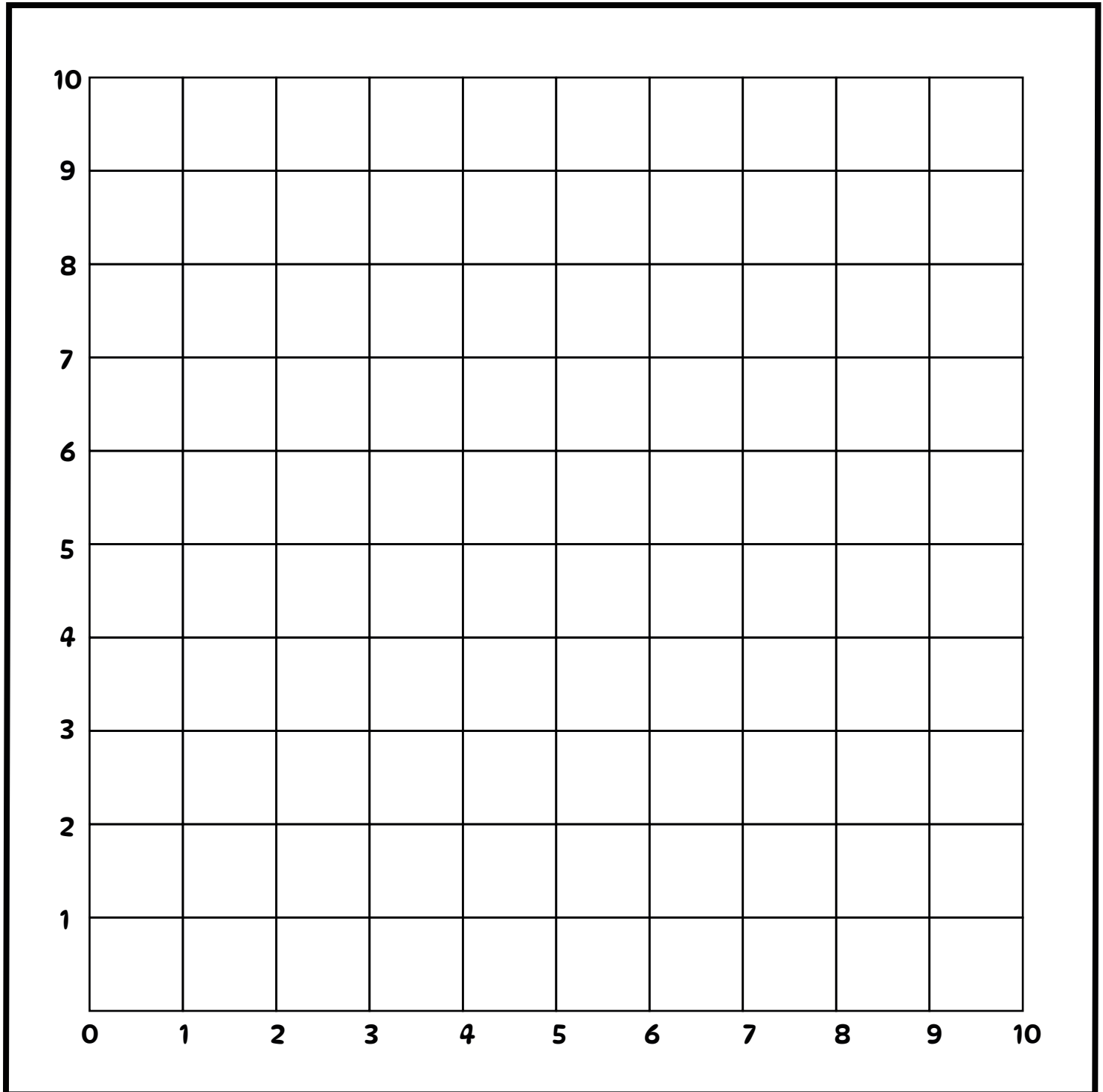
Name: _____

100TH DAY OF SCHOOL

Coordinate Graphing

Directions: Plot the points below to reveal the image.

A:	(10,2)	(4,2)	(0,5)	(9,9)	B:	(2,2)	C:	(6,2)	D:	(2,8)	E:	(4,8)	F:	(7,8)
	(8,2)	(4,3)	(1,5)	(9,8)		(2,1)		(6,1)		(3,8)		(4,6)		(7,6)
	(8,3)	(2,3)	(1,8)	(10,8)		(4,1)		(8,1)		(3,5)		(6,6)		(9,6)
	(6,3)	(2,2)	(2,8)	(10,2)		(4,2)		(8,2)		(1,5)		(6,8)		(9,8)
	(6,2)	(0,2)	(2,9)									(4,8)		(7,8)



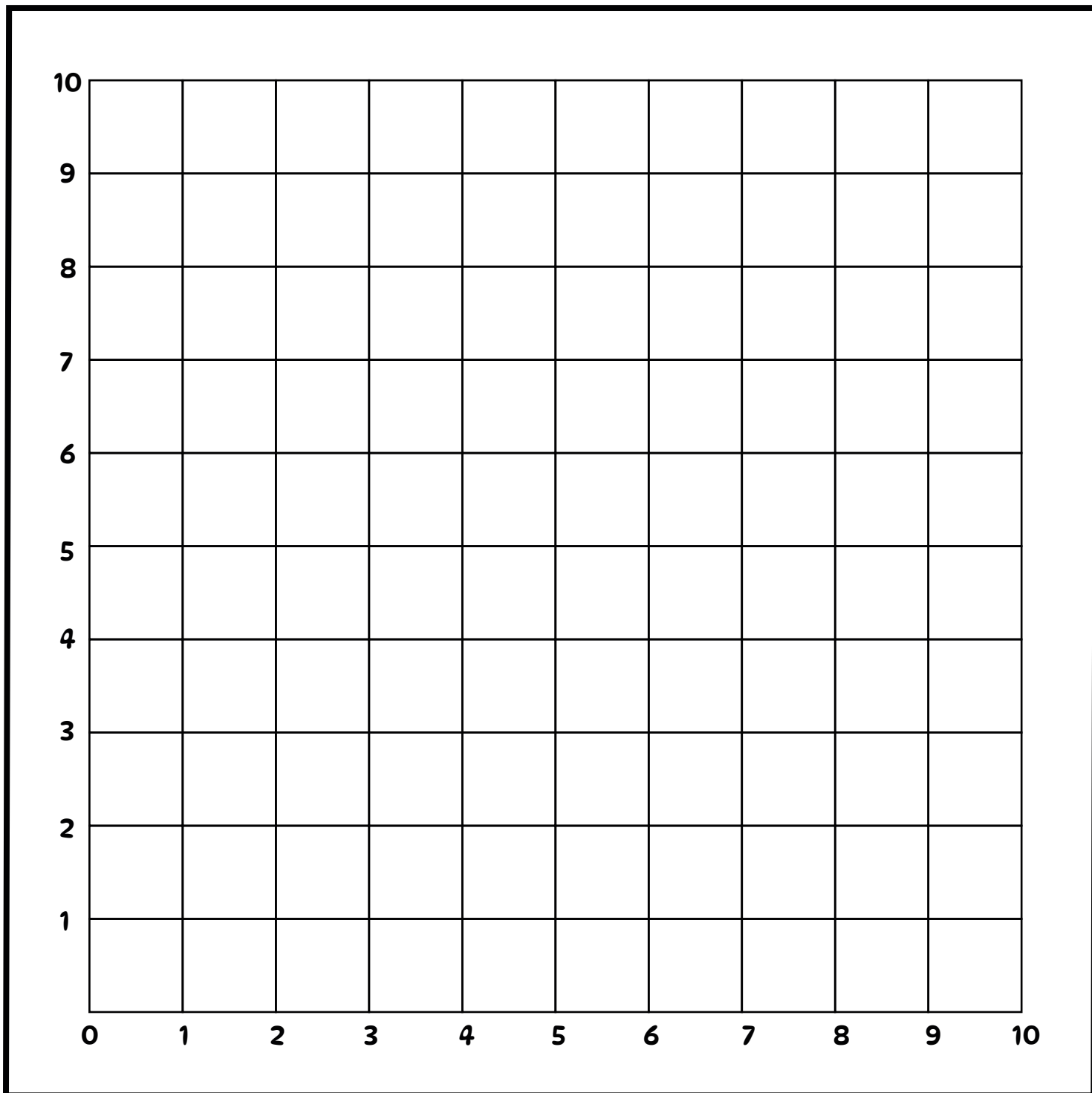
Name: _____

100TH DAY OF SCHOOL

Coordinate Graphing

Directions: Plot the points below to reveal the image.

A:	(4,3)	(2,6)	(3,8)	B:	(4,3)	(6,8)	C:	(7,3)	D:	(9,8)	E:	(5,7)	F:	(8,7)
	(4,2)	(1,6)	(3,3)		(5,2)	(5,8)		(8,2)		(8,8)		(5,3)		(8,3)
	(1,2)	(1,7)	(4,3)		(6,2)	(4,7)		(9,2)		(7,7)		(6,3)		(9,3)
	(1,3)	(2,7)			(7,3)	(4,3)		(10,3)				(6,7)		(9,7)
	(2,3)	(2,8)			(7,7)			(10,7)				(5,7)		(8,7)



Name: _____

100TH DAY OF SCHOOL

Coordinate Graphing

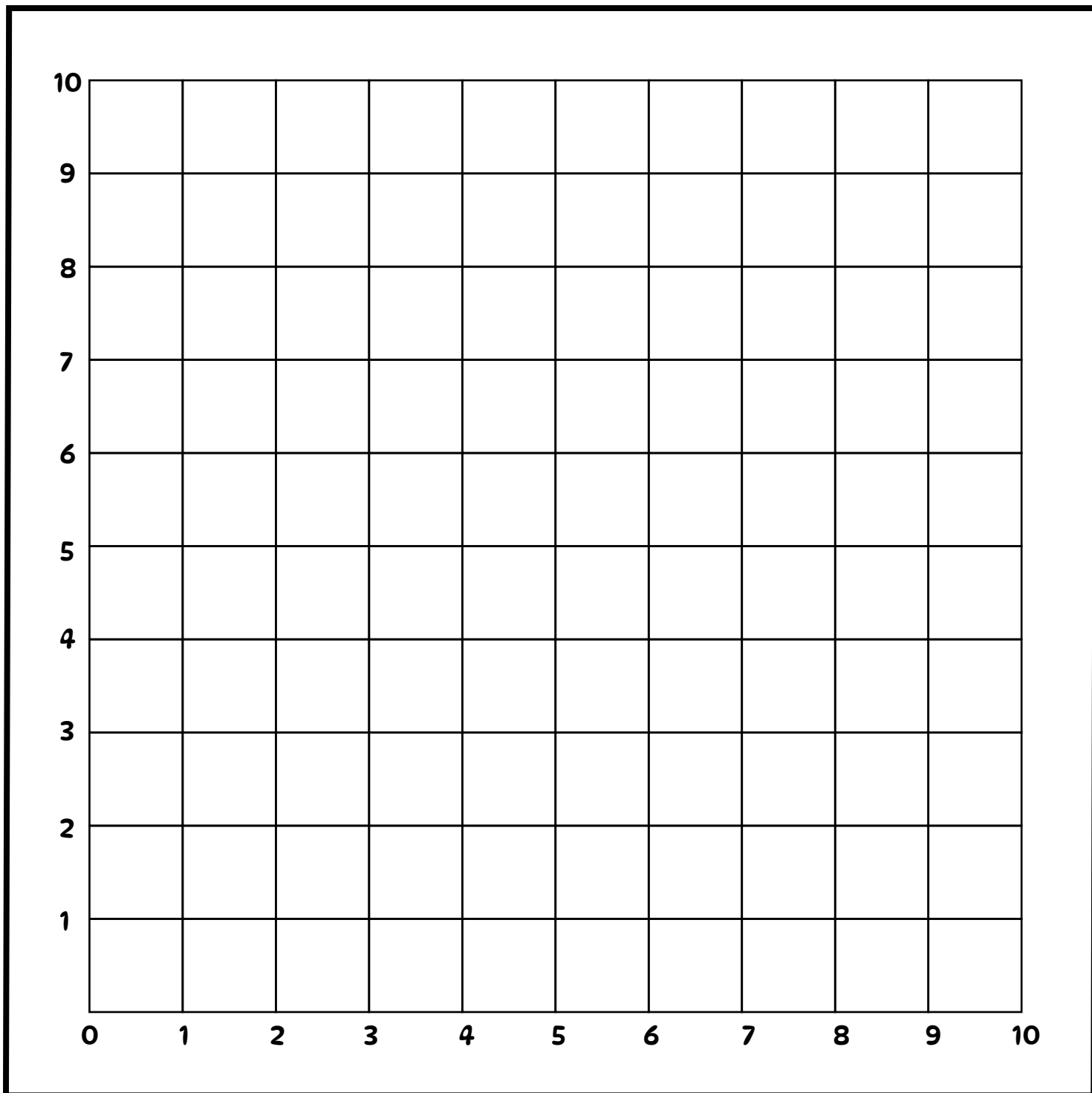
Directions: Plot the points below to reveal the image.

A: (7,4) (2,4) (2,8) (7,8)
(5,4) (2,5) (4,8) (7,7)
(5,3) (0,5) (4,9) (9,7)
(4,3) (0,7) (5,9) (9,5)
(4,4) (2,7) (5,8) (8,5)

B: (1,5) (7,4)
(1,3)
(2,3)
(2,2)
(7,2)

C: (4,6)
(4,7)
(6,7)
(6,6)
(4,6)

D: (7,4) (8,1)
(7,5) (7,1)
(6,5) (7,2)
(6,6)
(8,6)



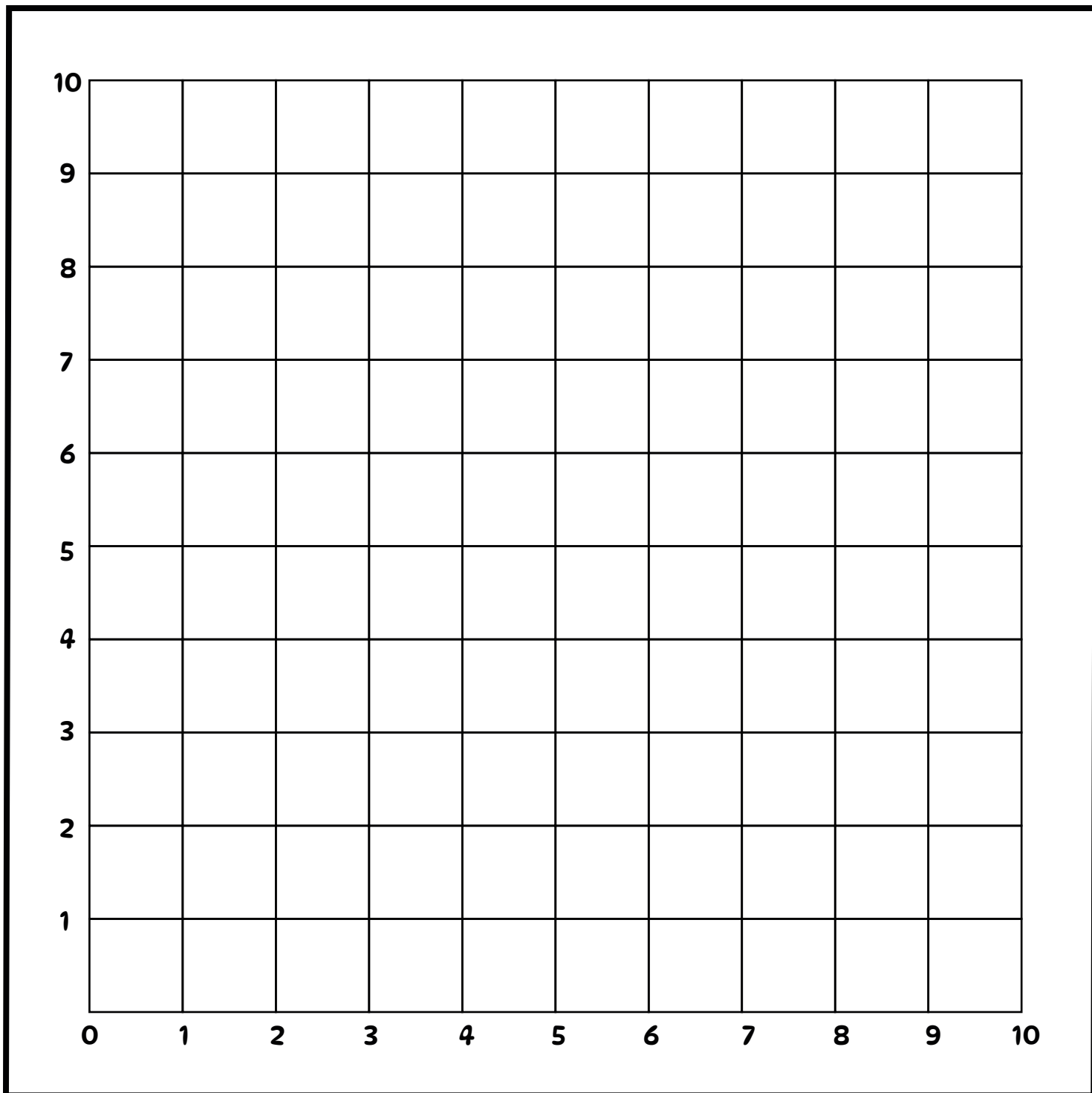
Name: _____

100TH DAY OF SCHOOL

Coordinate Graphing

Directions: Plot the points below to reveal the image.

A:	(1,1)	(1,8)	B:	(1,1)	C:	(2,1)	D:	(2,0)	E:	(3,5)
	(1,2)	(1,1)		(2,0)		(8,2)		(2,9)		(7,6)
	(8,3)			(8,1)						(7,8)
	(8,10)			(8,3)						(3,7)
	(2,9)									(3,5)



Name: _____

100TH DAY OF SCHOOL

Coordinate Graphing

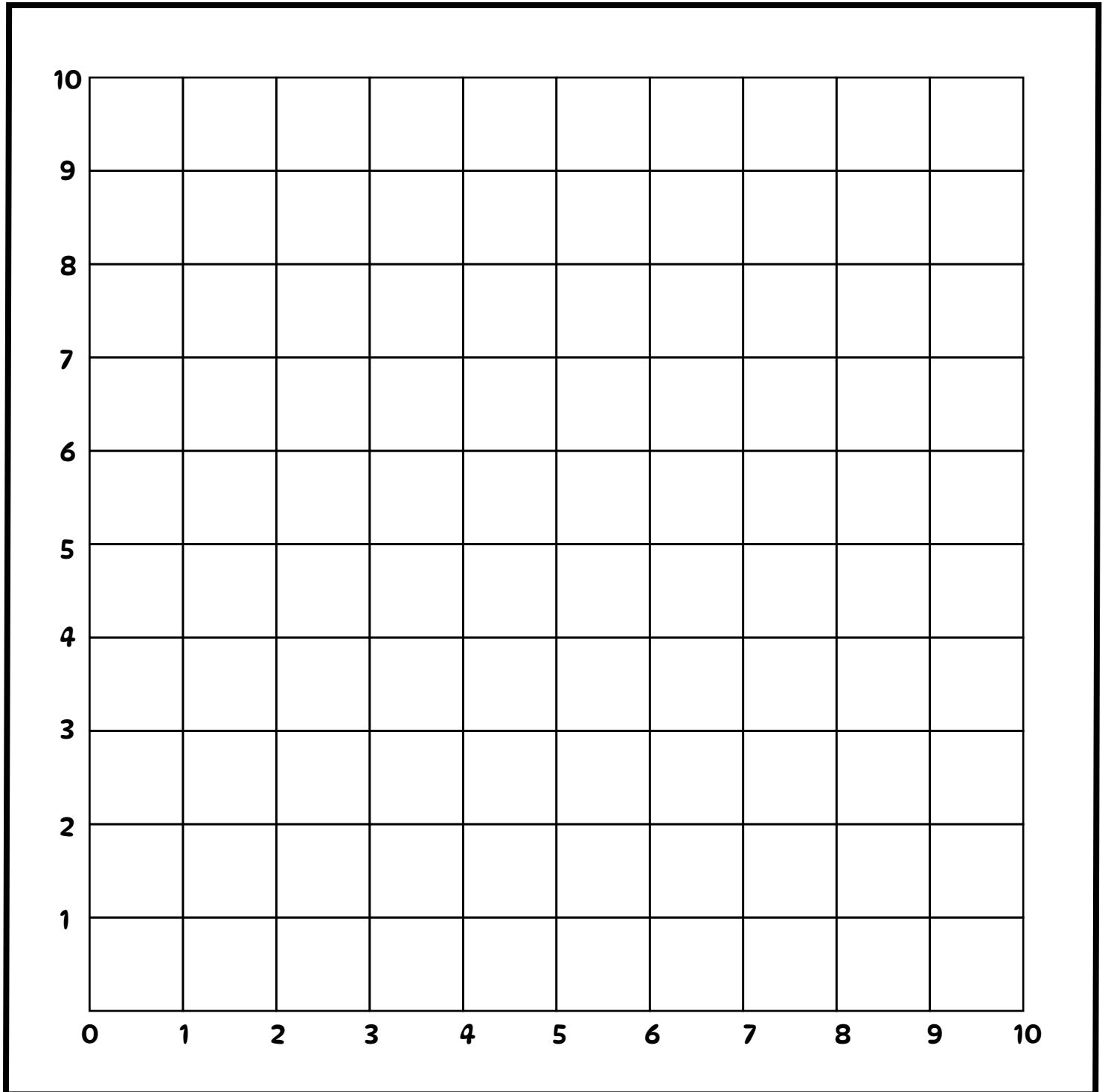
Directions: Plot the points below to reveal the image.

A: (3,1) (9,8)
(1,3) (8,9)
(1,1) (7,9)
(3,1) (1,3)
(9,7)

B: (8,6)
(6,8)

C: (7,5)
(5,7)

D: (2,1)
(1,2)



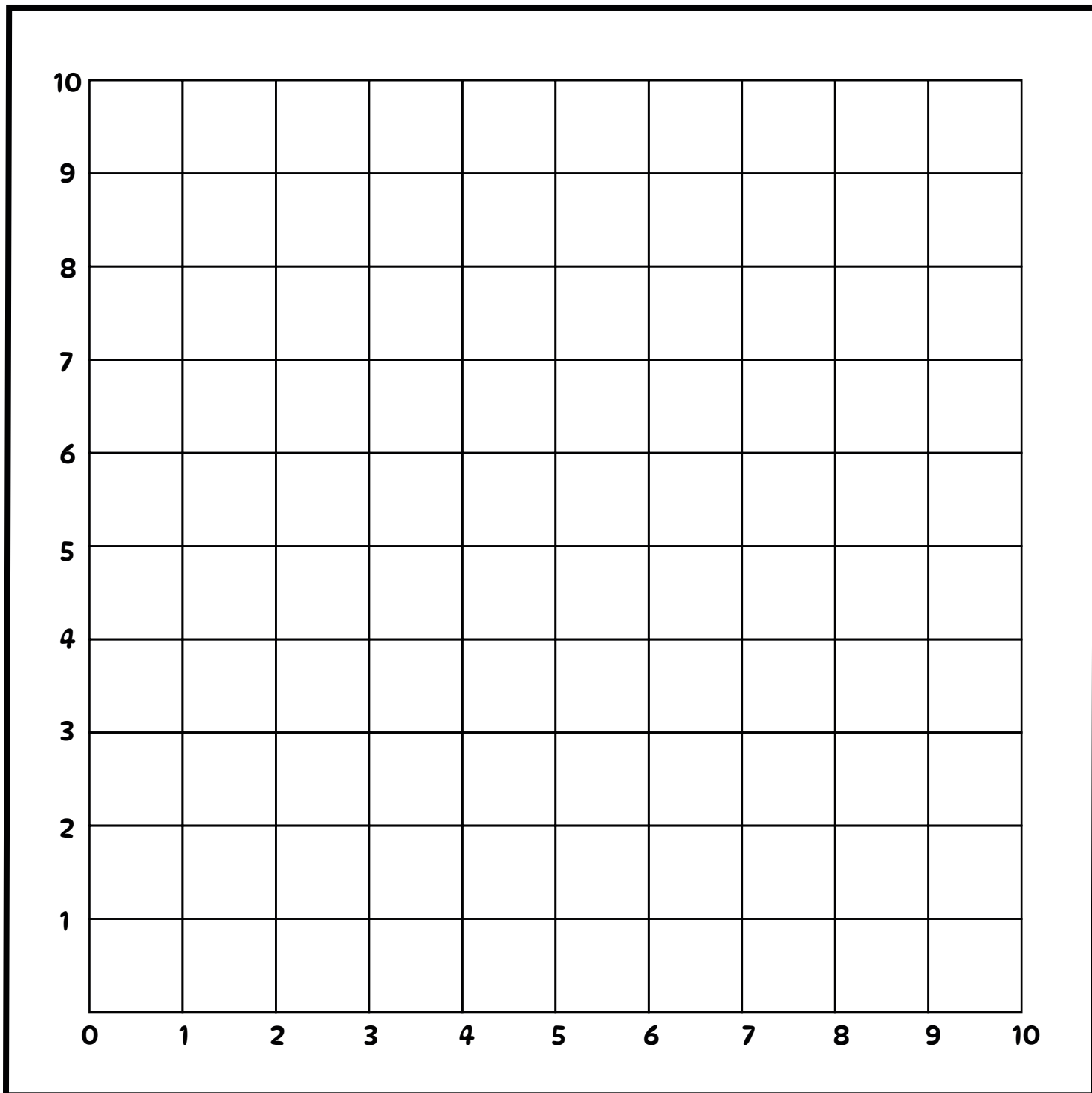
Name: _____

100TH DAY OF SCHOOL

Coordinate Graphing

Directions: Plot the points below to reveal the image.

A: (3,1) (3,8) (7,1) (2,7) (8,2) (2,2) (4,6) (8,7) (3,1) (6,6) (7,8) (7,7)
B: (3,8) (7,8) (3,7) (4,3) (6,3) (7,4) (7,2) (6,5) (7,4)
C: (3,4) (4,5) (4,3) (3,4) (6,3) (3,2) (7,4) (7,2) (6,5) (7,4)
D: (2,7) (6,8) (2,9) (7,9) (3,9) (8,9) (4,8) (8,7) (2,2)
E: (6,8) (7,9) (8,9) (8,7) (2,2)
F: (2,5) (1,5) (1,2) (2,2)
G: (1,4) (2,4)
H: (8,2) (9,2) (9,5) (8,5)
I: (8,4) (9,4)



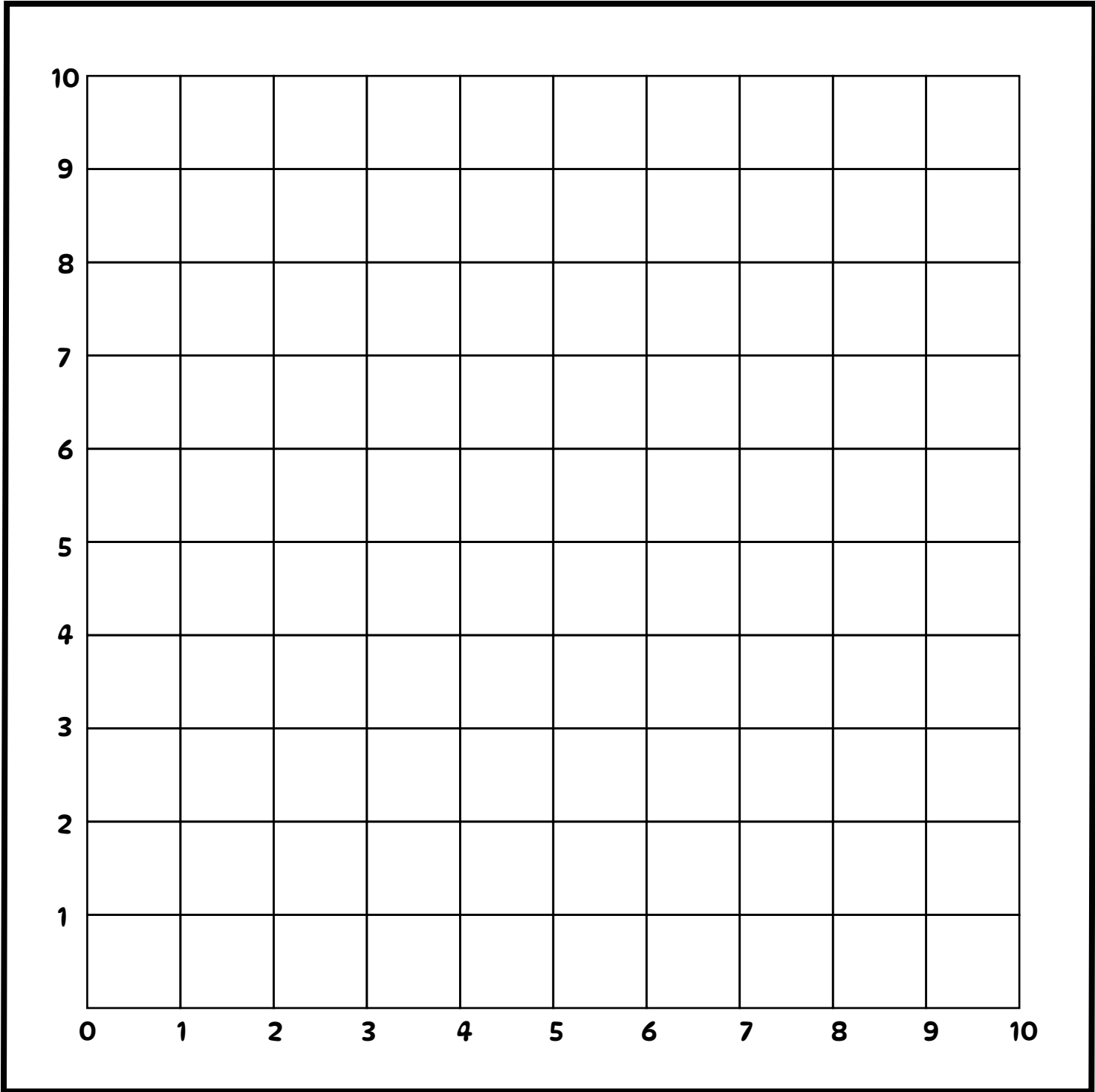
Name: _____

100TH DAY OF SCHOOL

Coordinate Graphing

Directions: Plot the points below to reveal the image.

A: (0,4) (4,4) (8,5) (10,0) B: (1,6) C: (2,8) (4,6) D: (5,8) (7,6) E: (2,7) G: (3,7) H: (6,7) I: (1,1) J: (3,2) K: (6,1) L: (8,2)
(1,4) (4,5) (10,5) (10,5) (1,9) (3,9) (6,9) (3,6) (3,8) (6,8) (1,2) (4,3) (6,2) (9,3)
(1,5) (6,5) (10,6) (2,9) (4,9) (7,9) F: (4,8) (7,8) (2,1) (4,2) (7,1) (9,2)
(2,5) (6,4) (0,6) (2,6) (5,8) (8,8) (5,7) (4,7) (7,7) (1,1) (3,2) (6,1) (8,2)
(2,4) (8,4) (0,0) (5,7) (8,7) (6,6) (3,7) (6,7)



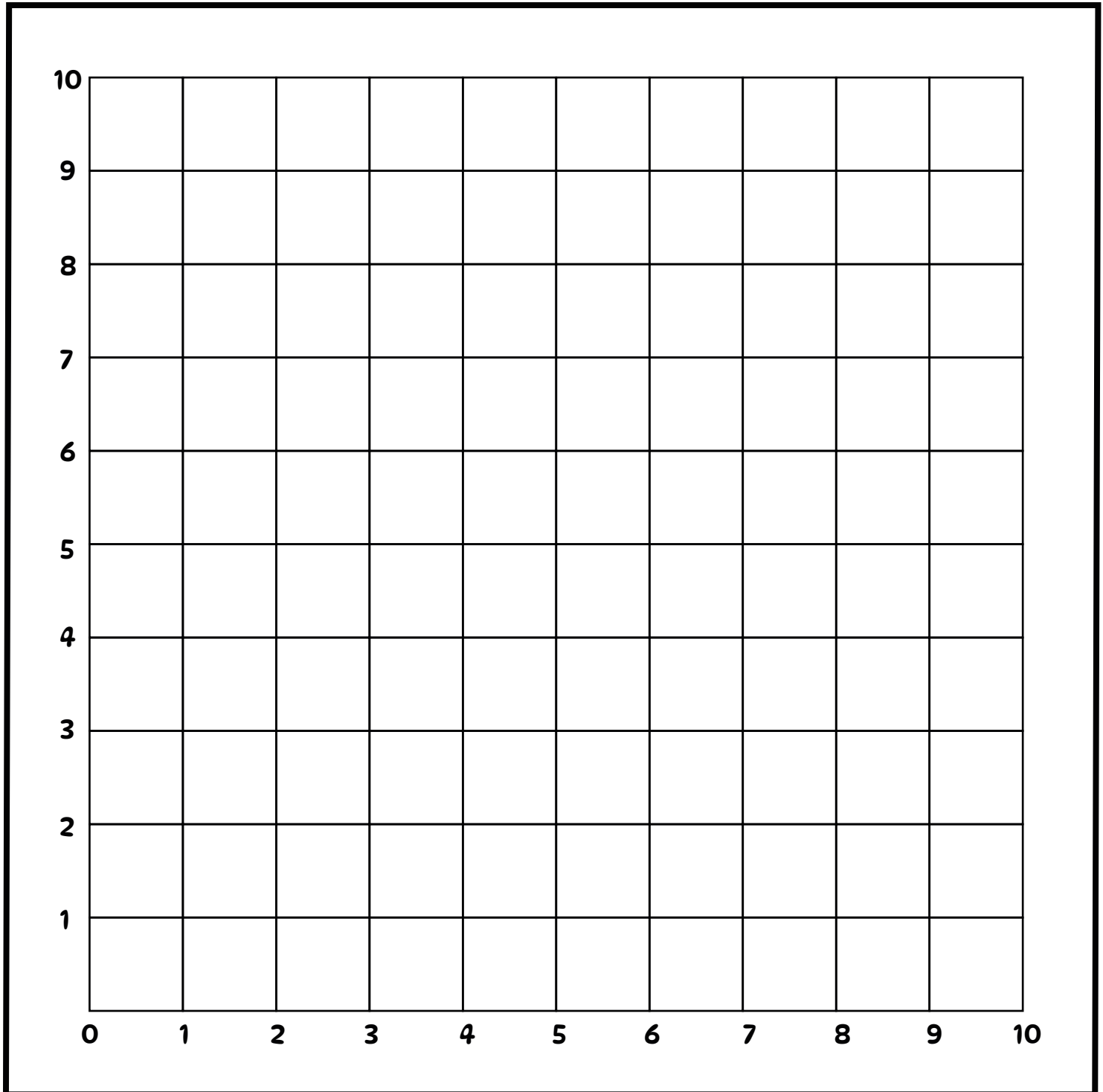
Name: _____

100TH DAY OF SCHOOL

Coordinate Graphing

Directions: Plot the points below to reveal the image.

A:	B:	C:	E:	G:	H:	I:	J:
(1,0)	(3,1)	(4,1)	(6,1)	(4,5)	(4,7)	(6,5)	(6,6)
(5,10)	(3,4)	(4,4)	(6,4)	(5,6)	(5,8)	(7,5)	(6,7)
(7,10)	(8,4)	D:	F:	(5,5)	(5,7)	(7,4)	(7,6)
(10,0)	(8,1)	(5,2)	(7,2)	(4,5)	(4,7)	(6,5)	(6,6)
(1,0)	(3,1)	(6,3)	(7,3)				



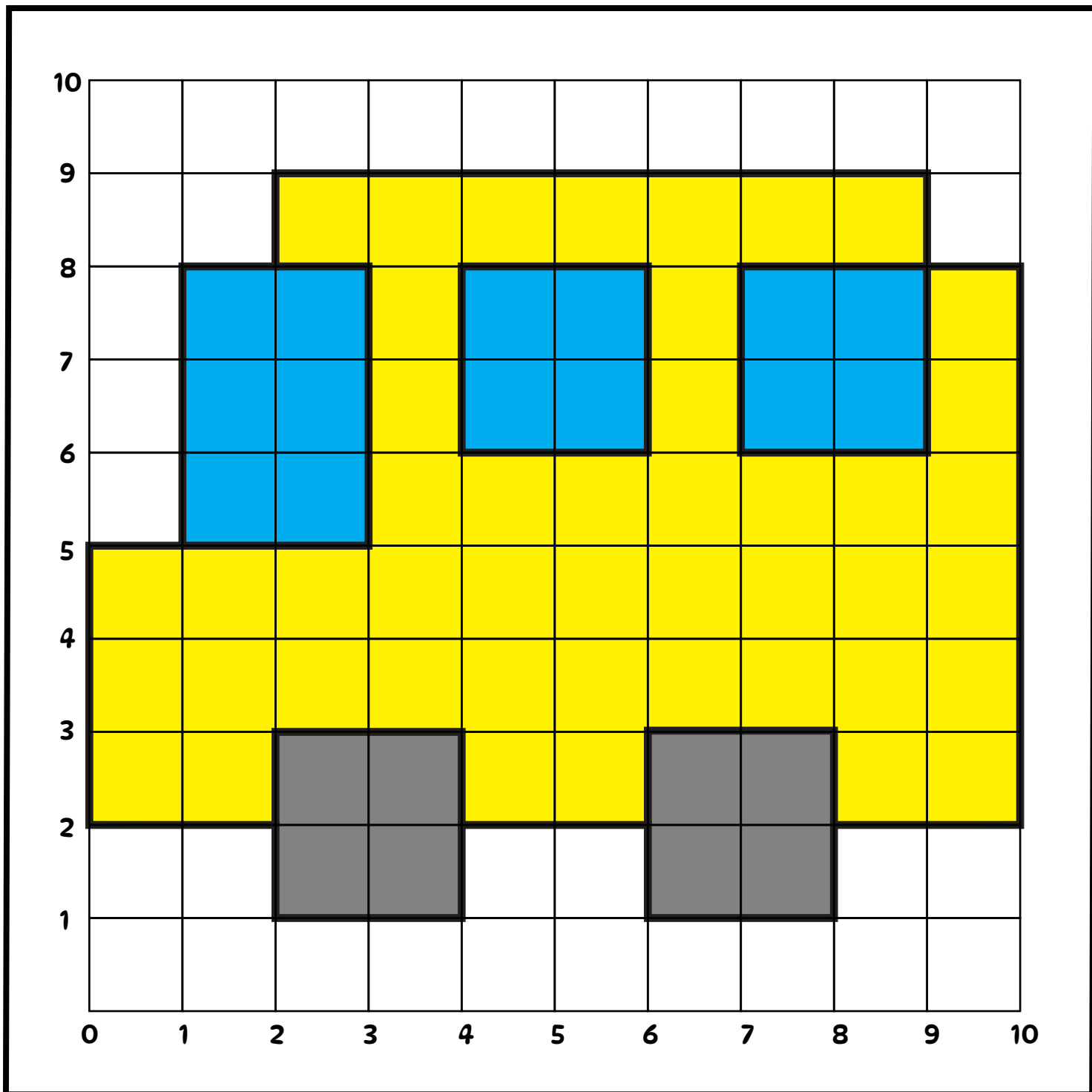
Name: _____

100TH DAY OF SCHOOL

Coordinate Graphing

Directions: Plot the points below to reveal the image.

A:	(10,2)	(4,2)	(0,5)	(9,9)	B:	(2,2)	C:	(6,2)	D:	(2,8)	E:	(4,8)	F:	(7,8)
	(8,2)	(4,3)	(1,5)	(9,8)		(2,1)		(6,1)		(3,8)		(4,6)		(7,6)
	(8,3)	(2,3)	(1,8)	(10,8)		(4,1)		(8,1)		(3,5)		(6,6)		(9,6)
	(6,3)	(2,2)	(2,8)	(10,2)		(4,2)		(8,2)		(1,5)		(6,8)		(9,8)
	(6,2)	(0,2)	(2,9)									(4,8)		(7,8)




Name: _____

100TH DAY OF SCHOOL

Coordinate Graphing

Directions: Plot the points below to reveal the image.

A:	(4,3)	(2,6)	(3,8)	B:	(4,3)	(6,8)	C:	(7,3)	D:	(9,8)	E:	(5,7)	F:	(8,7)
	(4,2)	(1,6)	(3,3)		(5,2)	(5,8)		(8,2)		(8,8)		(5,3)		(8,3)
	(1,2)	(1,7)	(4,3)		(6,2)	(4,7)		(9,2)		(7,7)		(6,3)		(9,3)
	(1,3)	(2,7)			(7,3)	(4,3)		(10,3)				(6,7)		(9,7)
	(2,3)	(2,8)			(7,7)			(10,7)				(5,7)		(8,7)



Name: _____

100TH DAY OF SCHOOL

Coordinate Graphing

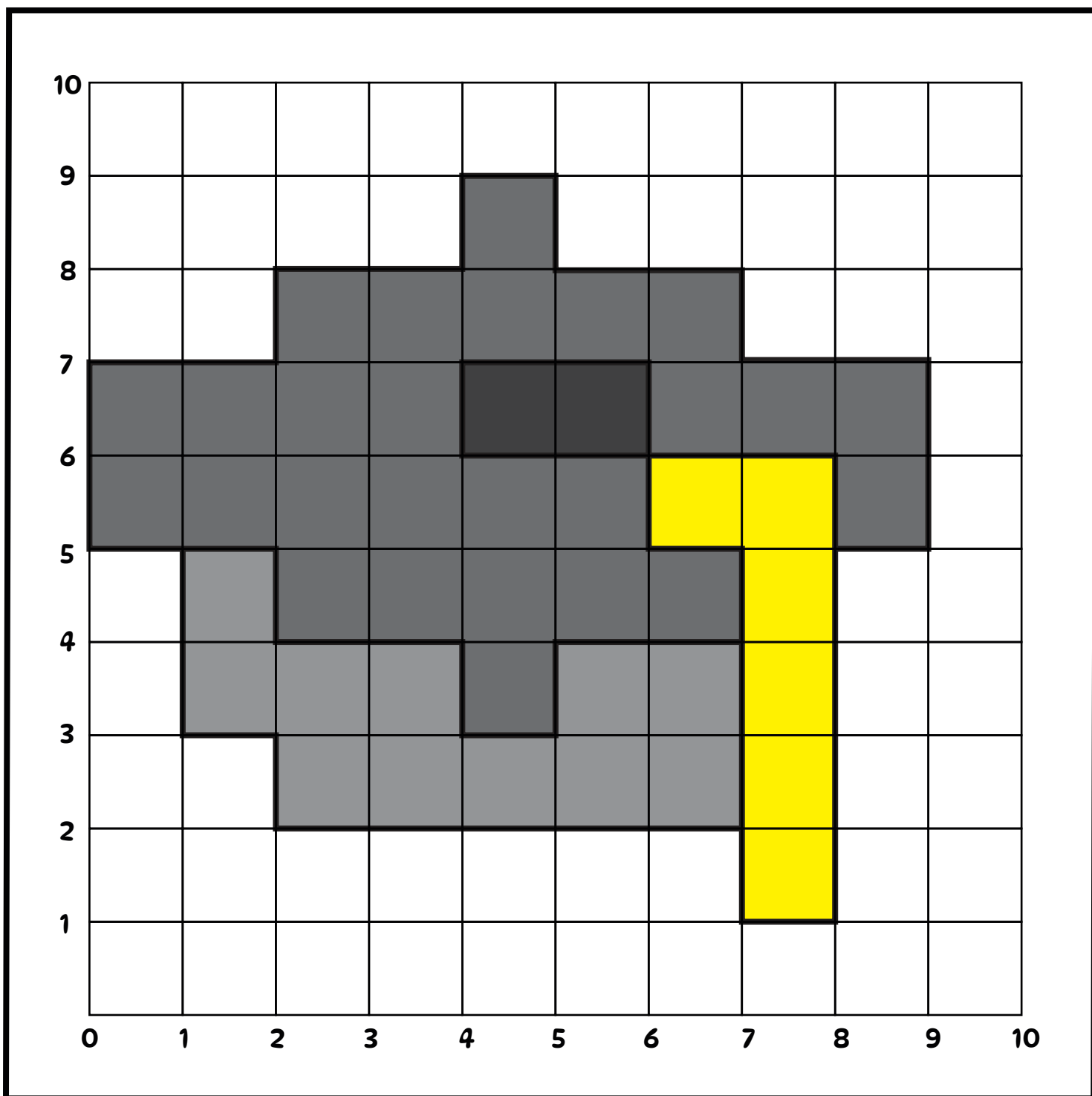
Directions: Plot the points below to reveal the image.

A: (7,4) (2,4) (2,8) (7,8)
(5,4) (2,5) (4,8) (7,7)
(5,3) (0,5) (4,9) (9,7)
(4,3) (0,7) (5,9) (9,5)
(4,4) (2,7) (5,8) (8,5)

B: (1,5) (7,4)
(1,3)
(2,3)
(2,2)
(7,2)

C: (4,6)
(4,7)
(6,7)
(6,6)
(4,6)

D: (7,4) (8,1)
(7,5) (7,1)
(6,5) (7,2)
(6,6)
(8,6)



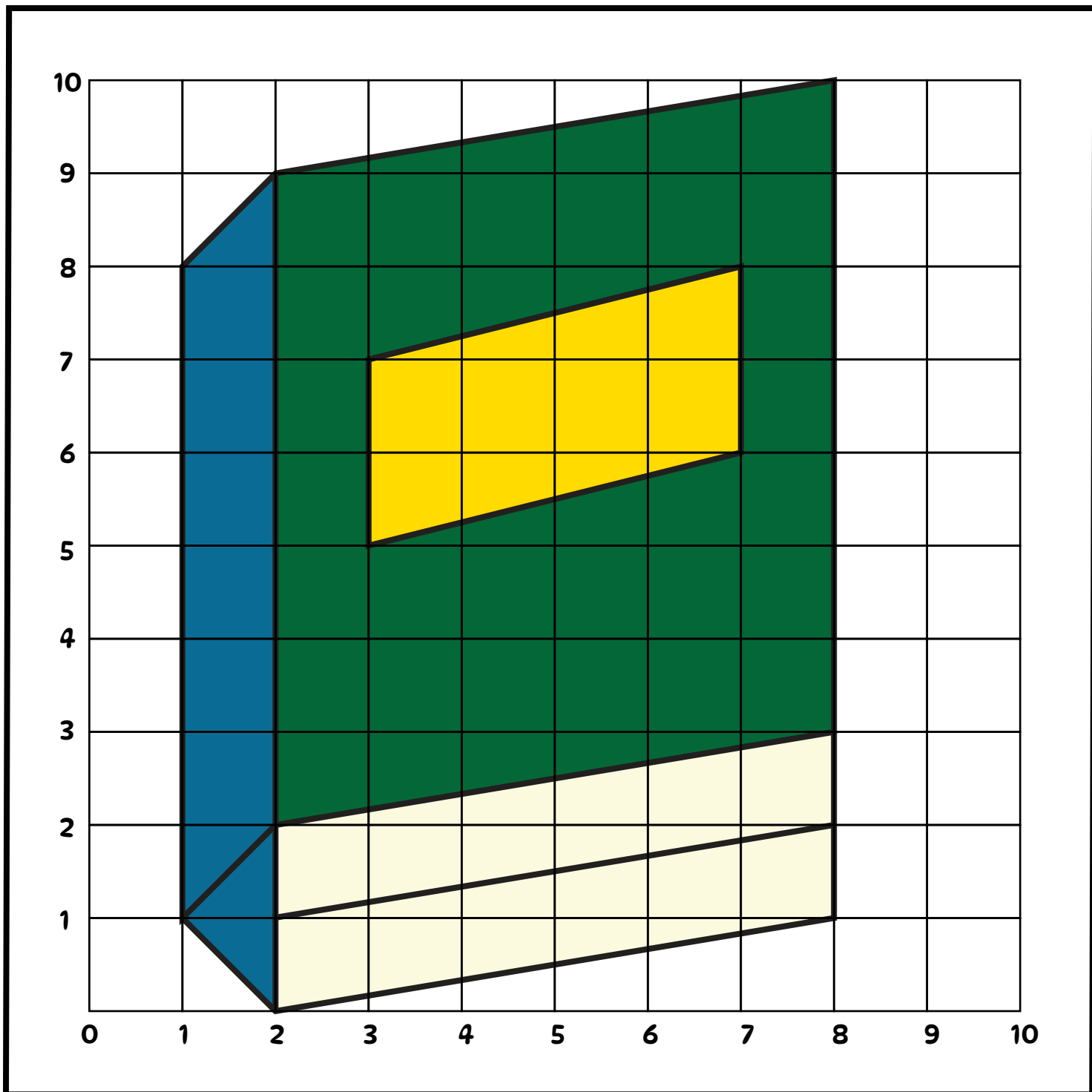
Name: _____

100TH DAY OF SCHOOL

Coordinate Graphing

Directions: Plot the points below to reveal the image.

A:	(1,1)	(1,8)	B:	(1,1)	(2,0)	C:	(2,1)	(8,2)	D:	(2,0)	(2,9)	E:	(3,5)	(3,8)
	(1,2)	(1,1)		(2,0)	(8,2)		(2,1)	(8,2)		(2,9)	(2,9)		(7,6)	(7,8)
	(8,3)			(8,1)										(7,8)
	(8,10)			(8,3)										(3,7)
	(2,9)													(3,5)



Name: _____

100TH DAY OF SCHOOL

Coordinate Graphing

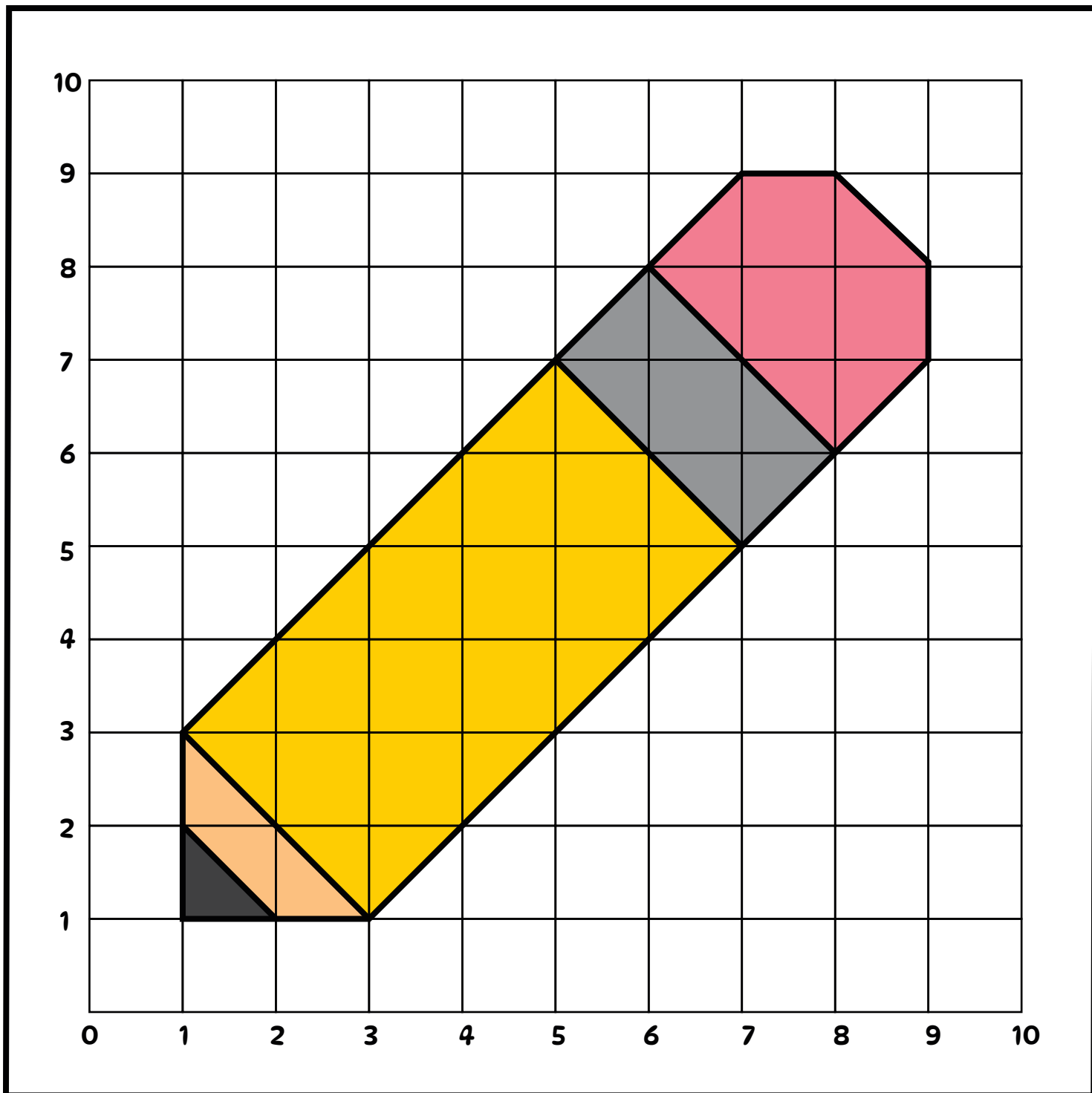
Directions: Plot the points below to reveal the image.

A: (3,1) (9,8)
(1,3) (8,9)
(1,1) (7,9)
(3,1) (1,3)
(9,7)

B: (8,6)
(6,8)

C: (7,5)
(5,7)

D: (2,1)
(1,2)



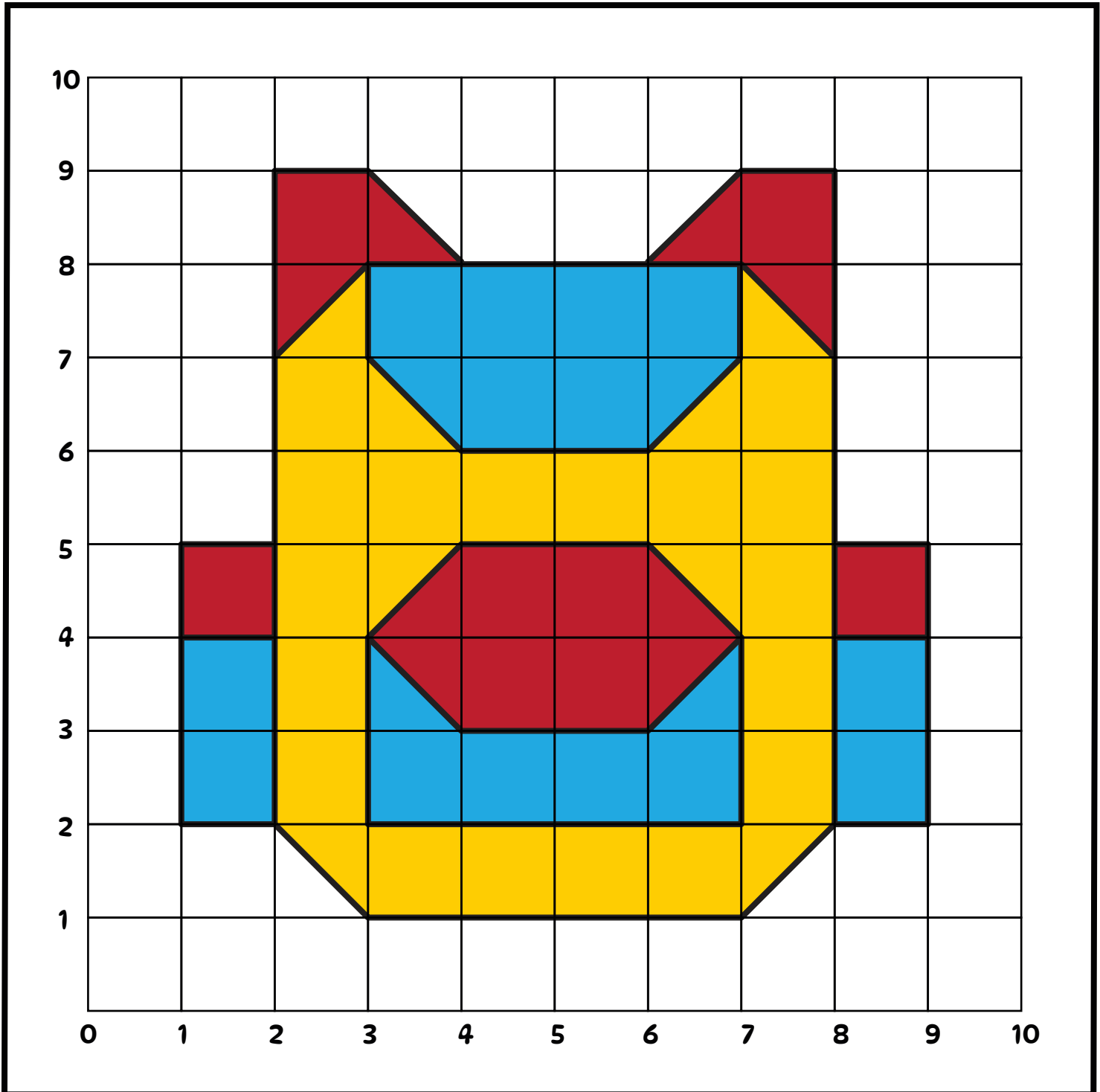
Name: _____

100TH DAY OF SCHOOL

Coordinate Graphing

Directions: Plot the points below to reveal the image.

A: (3,1) (3,8) (3,8) (7,8) B: (3,4) (4,5) (2,7) (6,8) (2,5) (1,4) (8,2) (8,4)
(7,1) (2,7) (3,7) (4,3) (3,4) (2,9) (7,9) (1,5) (2,4) (9,2) (9,4)
(8,2) (2,2) (4,6) (6,3) (3,2) (3,9) (8,9) (1,2) (9,5)
(8,7) (3,1) (6,6) (7,4) (7,2) (4,8) (8,7) (2,2) (8,5)
(7,8) (7,7) (6,5) (7,4)



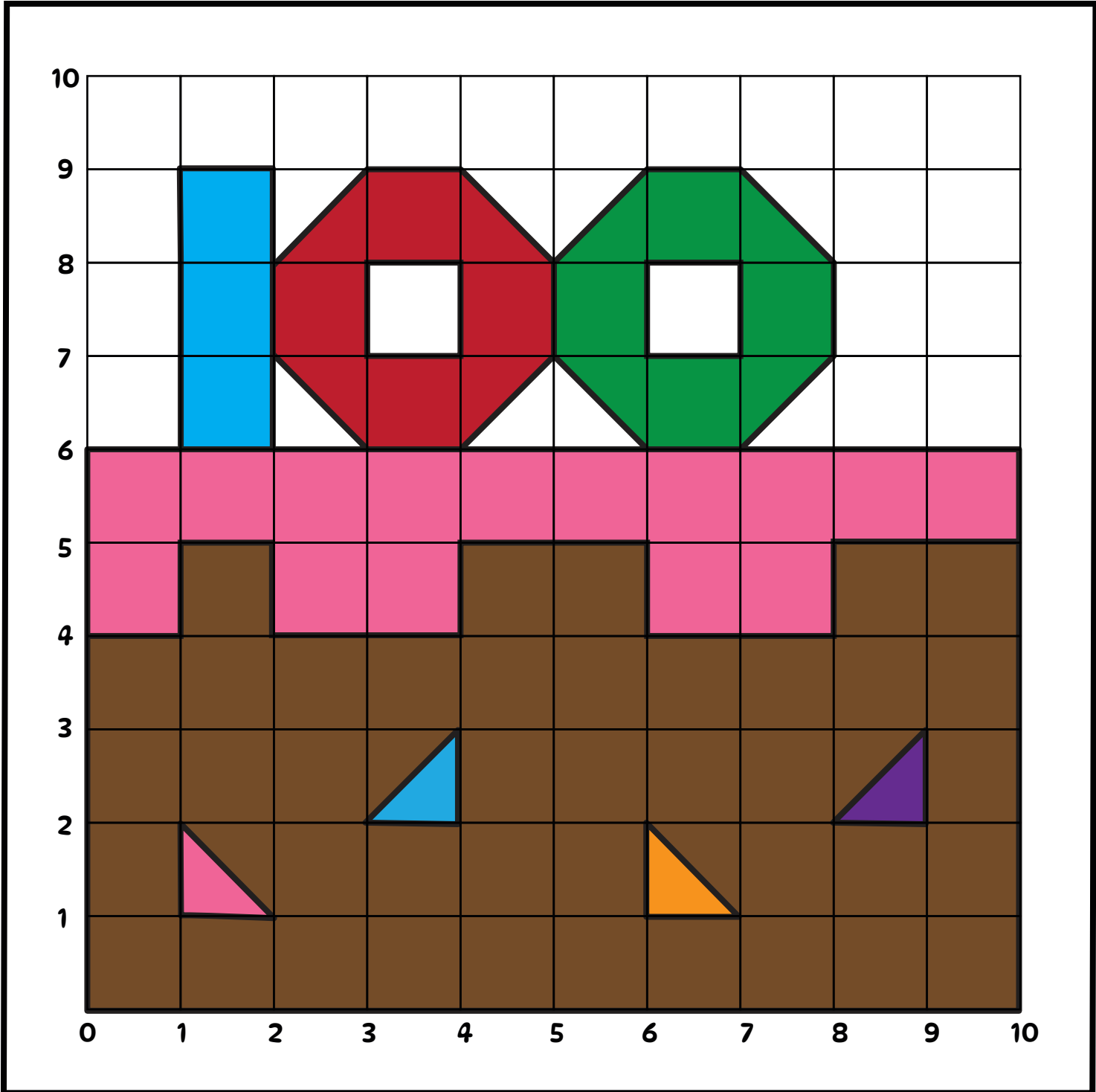
Name: _____

100TH DAY OF SCHOOL

Coordinate Graphing

Directions: Plot the points below to reveal the image.

A: (0,4) (4,4) (8,5) (10,0) B: (1,6) C: (2,8) (4,6) D: (5,8) (7,6) E: (2,7) G: (3,7) H: (6,7) I: (1,1) J: (3,2) K: (6,1) L: (8,2)
(1,4) (4,5) (10,5) (10,5) (1,9) (3,9) (6,9) (3,6) (3,8) (6,8) (1,2) (4,3) (6,2) (9,3)
(1,5) (6,5) (10,6) (2,9) (4,9) (7,9) F: (4,8) (7,8) (2,1) (4,2) (7,1) (9,2)
(2,5) (6,4) (0,6) (2,6) (5,8) (8,8) (5,7) (4,7) (7,7) (1,1) (3,2) (6,1) (8,2)
(2,4) (8,4) (0,0) (5,7) (8,7) (6,6) (3,7) (6,7)



Name: _____

100TH DAY OF SCHOOL

Coordinate Graphing

Directions: Plot the points below to reveal the image.

A:	B:	C:	E:	G:	H:	I:	J:
(1,0)	(3,1)	(4,1)	(6,1)	(4,5)	(4,7)	(6,5)	(6,6)
(5,10)	(3,4)	(4,4)	(6,4)	(5,6)	(5,8)	(7,5)	(6,7)
(7,10)	(8,4)	D:	F:	(5,5)	(5,7)	(7,4)	(7,6)
(10,0)	(8,1)	(5,2)	(7,2)	(4,5)	(4,7)	(6,5)	(6,6)
(1,0)	(3,1)	(6,3)	(7,3)				

