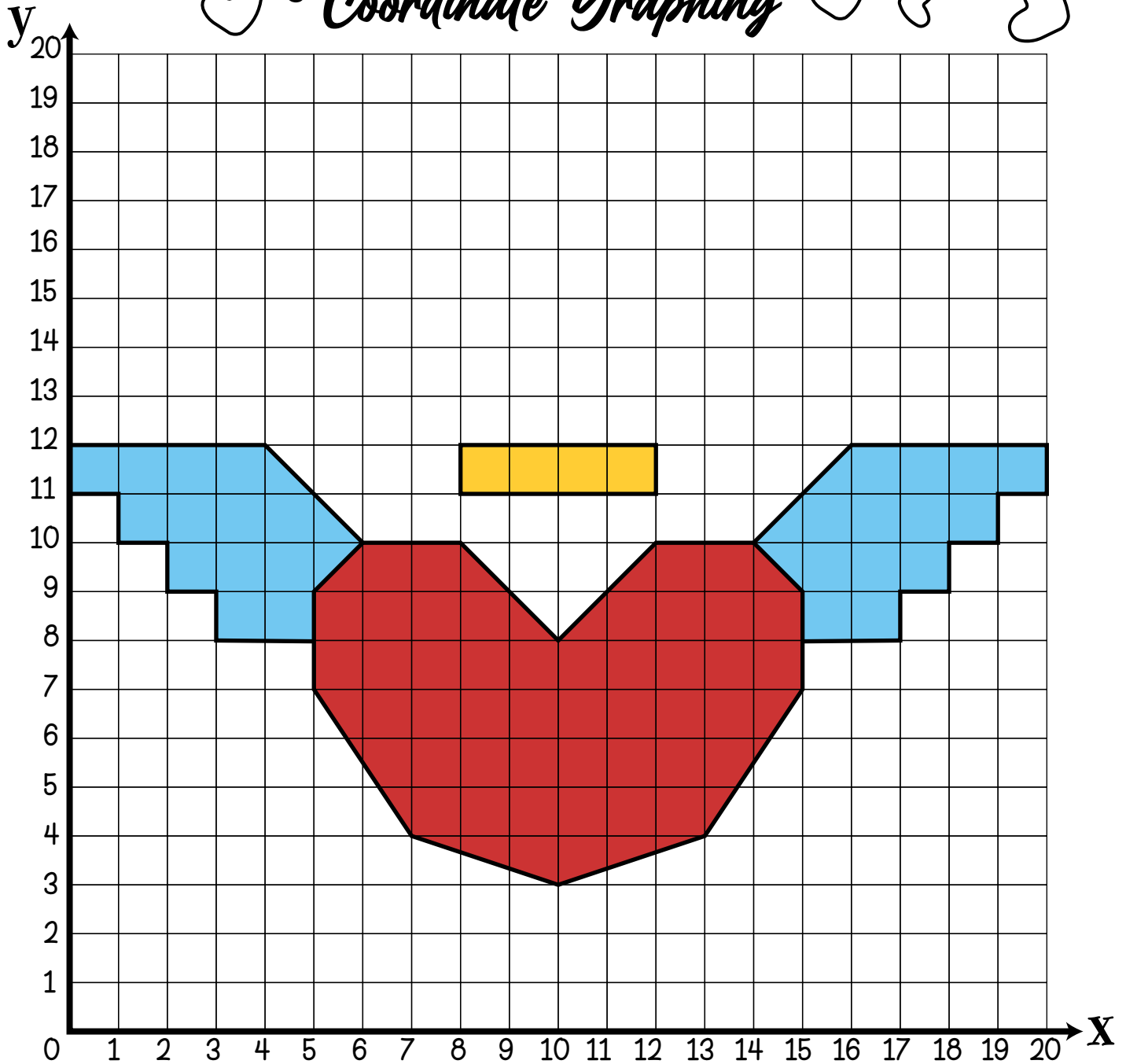


Name: \_\_\_\_\_

ANSWER KEY

# VALENTINE'S DAY

## Coordinate Graphing





Shape 1	Shape 2	Shape 3	Shape 4
(10,3) (6,10)	(15,8) (20,12)	(5,8) (4,12)	(8,11)
(13,4) (5,9)	(17,8) (16,12)	(3,8) (6,10)	(12,11)
(15,7) (5,7)	(17,9) (14,10)	(3,9)	(12,12)
(15,9) (7,4)	(18,9)	(2,9)	(8,12)
(14,10) (10,3)	(18,10)	(1,10)	
(12,10)	(19,10)	(1,11)	
(10,8)	(19,11)	(0,11)	
(8,10)	(20,11)	(0,12)	

Name: \_\_\_\_\_

ANSWER KEY

# VALENTINE'S DAY

## Coordinate Graphing



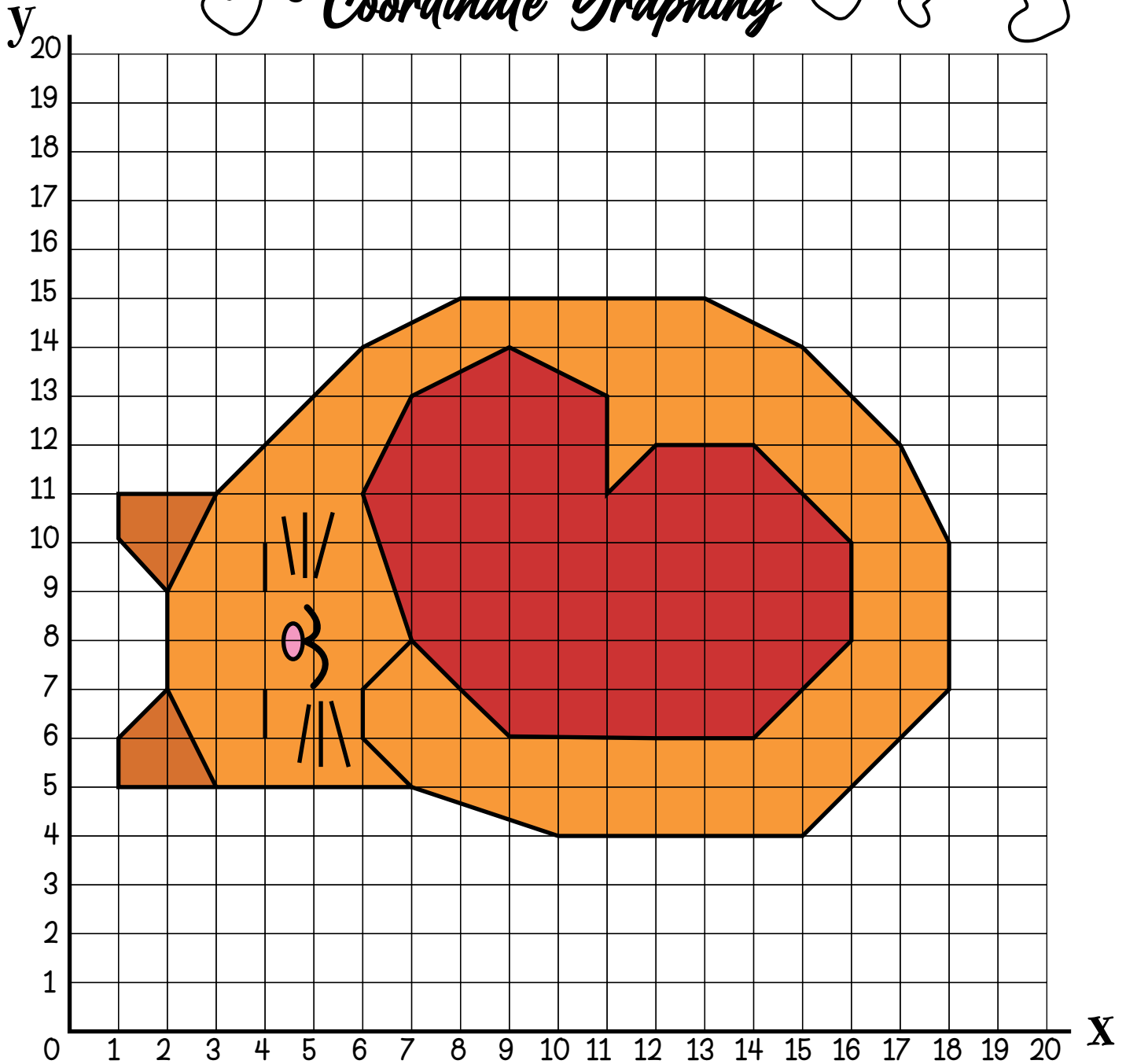

Shape 1	Shape 2	Shape 3	Shape 4	Shape 6	Shape 8	Shape 9	Shape 10	Shape 11
(13,8)	(14,13)	(6,13)	(13,5,9) (10,6) (6,5,9)	(15,4) (9,2)	(13,2)	(5,2)	(12,12) (9,12)	(7,5)
(14,10)	(15,13)	(5,13)	(16,6) (9,7)	(16,3) (8,1)	(15,2)	(7,2)	(12,11) (9,11)	(10,4)
(14,13)	(16,14)	(4,14)	(16,5) (8,7)	(16,2) (5,1)	(15,3)	(7,3)	(11,11) (11,11)	(13,5)
(12,15)	(16,15)	(4,15)	(15,4) (7,6)	(15,1) (4,2)	(13,3)	(5,3)	(11,10) (11,12)	
(8,15)	(15,16)	(5,16)	(13,4) (7,4)	(12,1) (4,3)	(13,2)	(5,2)	(9,10) (12,12)	
(6,13)	(13,16)	(7,16)	(13,6) (5,4)	(11,2) (5,4)			(9,11)	
(6,10)	(12,15)	(8,15)	(12,7) (4,5)	(11,3)			(8,11)	
(7,8)			(11,7) (4,6)	(9,3)			(8,12)	

Name: \_\_\_\_\_

ANSWER KEY

# VALENTINE'S DAY

## Coordinate Graphing





Shape 1			Shape 2		Shape 3		Shape 5	
(7,8)	(17,12)	(3,5)	(7,8)	(11,13)	(3,5)	(2,9)		
(6,7)	(15,14)	(7,5)	(9,6)	(9,14)	(1,5)	(1,10)		
(6,6)	(13,15)		(14,6)	(7,13)	(1,6)	(1,11)		
(7,5)	(8,15)		(16,8)	(6,11)	(2,7)	(3,11)		
(10,4)	(6,14)		(16,10)	(7,8)				
(15,4)	(3,11)		(14,12)					
(18,7)	(2,9)		(12,12)					
(18,10)	(2,7)		(11,11)					

Name: \_\_\_\_\_

ANSWER KEY

# VALENTINE'S DAY

## Coordinate Graphing





Shape 1	Shape 2	Shape 3	Shape 4	Shape 5	Shape 6	Shape 7
(2,4)	(4,12)	(5,11)	(10,6)	(14,7) (8,12)	(15,9) (17,17)	(5,13)
(2,12)	(5,11)	(5,8)	(9,5)	(15,7) (7,11)	(15,10) (12,12)	(6,13)
(2,13)	(7,11)	(7,6)	(9,4)	(15,8) (7,10)	(17,11)	(6,14)
(3,14)	(8,12)	(11,6)	(10,3)	(16,8) (9,8)	(17,12)	(5,14)
(4,14)	(9,12)	(11,7)	(14,3)	(16,9) (12,8)	(16,12)	(5,13)
(4,12)	(6,15)	(12,8)	(14,7)	(14,9)	(16,13)	
	(4,15)		(13,8)	(14,10)	(18,15)	
			(12,8)	(12,12)	(18,17)	

Name: \_\_\_\_\_

ANSWER KEY

# VALENTINE'S DAY

## Coordinate Graphing





Shape 1	Shape 2	Shape 3	Shape 4	Shape 5	Shape 6	Shape 7	Shape 8	Shape 9	Shape 10
(8,1)	(11,4)	(11,6) (12,7)	(10,6) (9,7)	(11,8)	(11,9) (8,9)	(12,9) (11,13)	(14,14)	(12,13)	(12,15)
(13,1)	(11,8)	(13,6) (11,7)	(8,6) (10,7)	(12,9)	(11,13) (9,9)	(13,9)	(14,15)	(12,14)	(11,17)
(14,3)	(10,8)	(13,7)	(8,7)	(9,9)	(9,13)	(15,11)	(15,15)	(10,14)	(10,17)
(14,4)	(10,4)	(14,6)	(7,6)	(10,8)	(8,14)	(15,13)	(15,16)	(8,16)	(9,15)
(7,4)		(15,6)	(6,6)		(5,14)	(16,13)	(13,16)	(6,16)	
(7,3)		(15,7)	(6,7)		(5,13)	(16,14)	(11,14)	(6,15)	
(8,1)		(14,8)	(7,8)		(6,13)	(13,14)		(7,15)	
		(12,8)	(9,8)		(6,11)	(12,13)		(7,14)	

Name: \_\_\_\_\_

ANSWER KEY

# VALENTINE'S DAY

## Coordinate Graphing



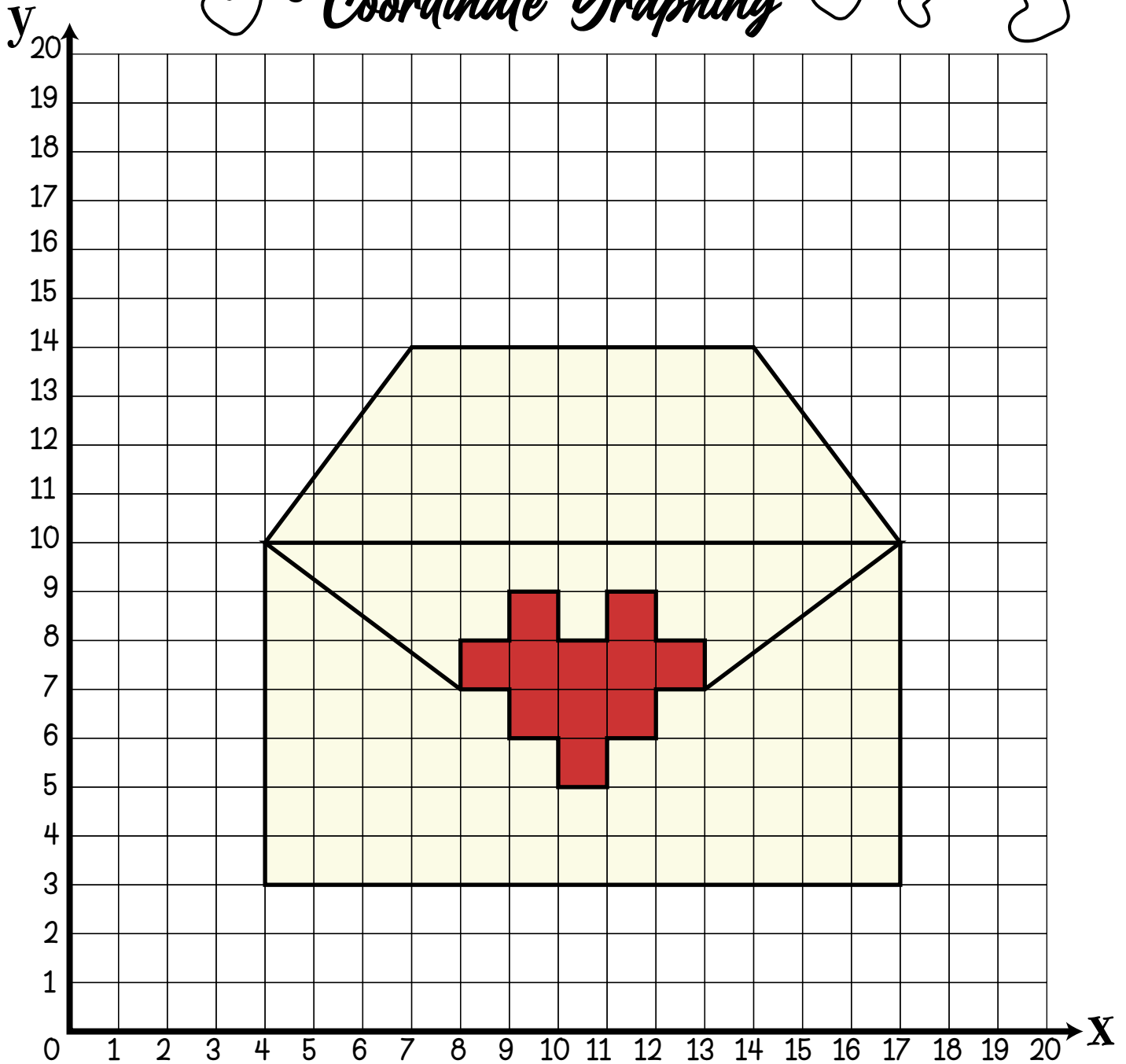
Shape 1	Shape 2	Shape 3	Shape 5
(5,7)	(9,11)	(9,8)	(14,8)
(4,6)	(5,11)	(12,8)	(17,9)
(5,8)	(6,7)	(11,6)	(15,11)
(4,7)	(8,11)	(11,8)	(14,7)
(3,8)	(4,11)	(12,6)	(18,9)
(5,7)	(4,8)	(10,11)	(14,11)
(3,12)	(6,6)	(11,11)	(15,7)
(1,12)	(8,12)	(10,11)	(18,10)
(7,6)	(7,12)	(14,8)	(15,6)
(7,11)	(7,11)	(10,12)	(17,10)
(8,7)	(6,11)	(14,12)	(17,6)
(6,11)	(8,12)	(13,12)	(18,11)
(8,8)	(6,12)	(13,11)	(18,8)
(5,12)	(9,8)	(9,11)	(18,12)
		(12,11)	(17,8)
			(15,12)

Name: \_\_\_\_\_

# ANSWER KEY

# VALENTINE'S DAY

## Coordinate Graphing



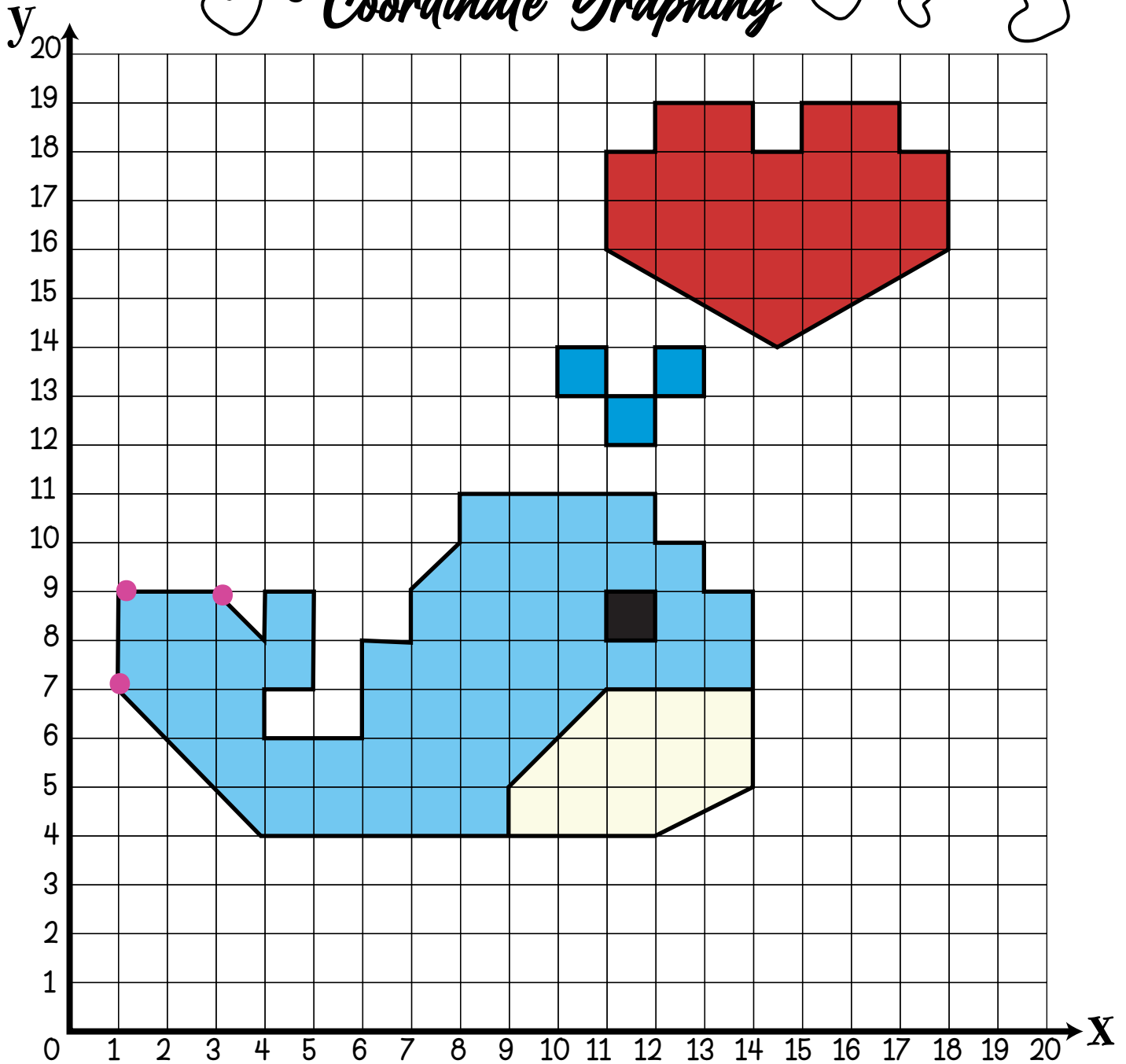

Shape 1	Shape 2	Shape 3
(4,3)	(4,10) (12,6)	(8,7) (12,9)
(17,3)	(8,7) (12,7)	(8,8) (12,8)
(17,10)	(9,7) (13,7)	(9,8) (12,8)
(14,14)	(9,6) (17,10)	(9,9)
(7,14)	(10,6) (4,10)	(10,9)
(4,10)	(10,5)	(10,8)
(4,3)	(11,5)	(11,8)
	(11,6)	(11,9)

Name: \_\_\_\_\_

ANSWER KEY

# VALENTINE'S DAY

## Coordinate Graphing

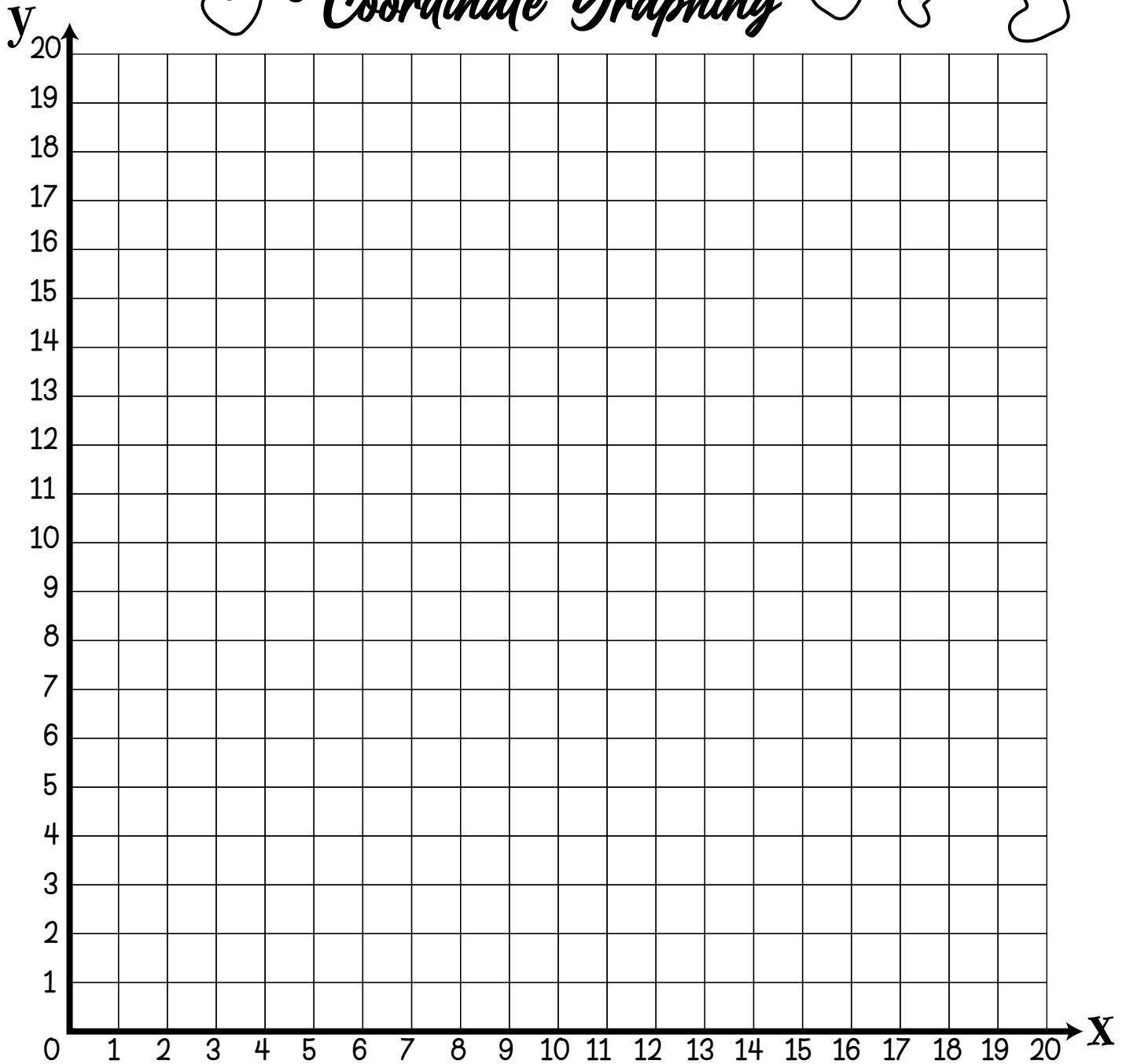



Shape 1	Shape 2	Shape 3	Shape 4	Shape 5
(4,4) (8,11) (5,7)	(9,4)	(11,8)	(11,12) (11,14)	(14,5,14) (14,19)
(12,4) (8,10) (5,9)	(9,5)	(12,8)	(12,12) (10,14)	(18,16) (12,19)
(14,5) (7,9) (4,9)	(11,7)	(12,9)	(12,13) (10,13)	(18,18) (12,18)
(14,9) (7,8) (4,8)	(14,7)	(11,9)	(13,13) (11,13)	(17,18) (11,18)
(13,9) (6,8) (3,9)		(11,8)	(13,14) (11,12)	(17,19) (11,16)
(13,10) (6,6) (1,9)			(12,14)	(15,19) (14,5,14)
(12,10) (4,6) (1,7)			(12,13)	(15,18)
(12,11) (4,7) (4,4)			(11,13)	(14,18)

Name: \_\_\_\_\_

# VALENTINE'S DAY

## Coordinate Graphing

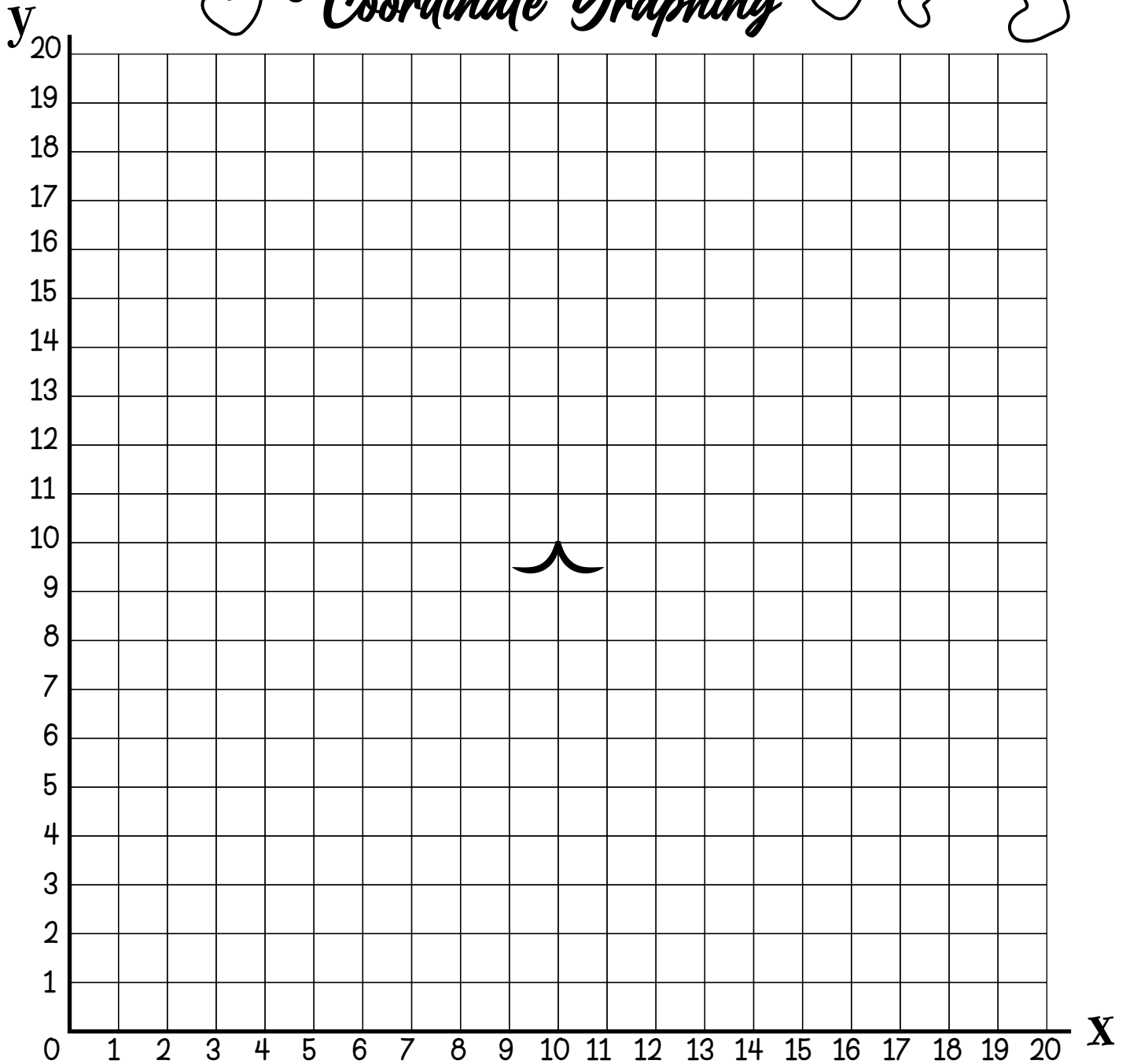


Shape 1	Shape 2	Shape 3	Shape 4
(10,3) (6,10)	(15,8) (20,12)	(5,8) (4,12)	(8,11)
(13,4) (5,9)	(17,8) (16,12)	(3,8) (6,10)	(12,11)
(15,7) (5,7)	(17,9) (14,10)	(3,9)	(12,12)
(15,9) (7,4)	(18,9)	(2,9)	(8,12)
(14,10) (10,3)	(18,10)	(1,10)	
(12,10)	(19,10)	(1,11)	
(10,8)	(19,11)	(0,11)	
(8,10)	(20,11)	(0,12)	

Name: \_\_\_\_\_

# VALENTINE'S DAY

## Coordinate Graphing

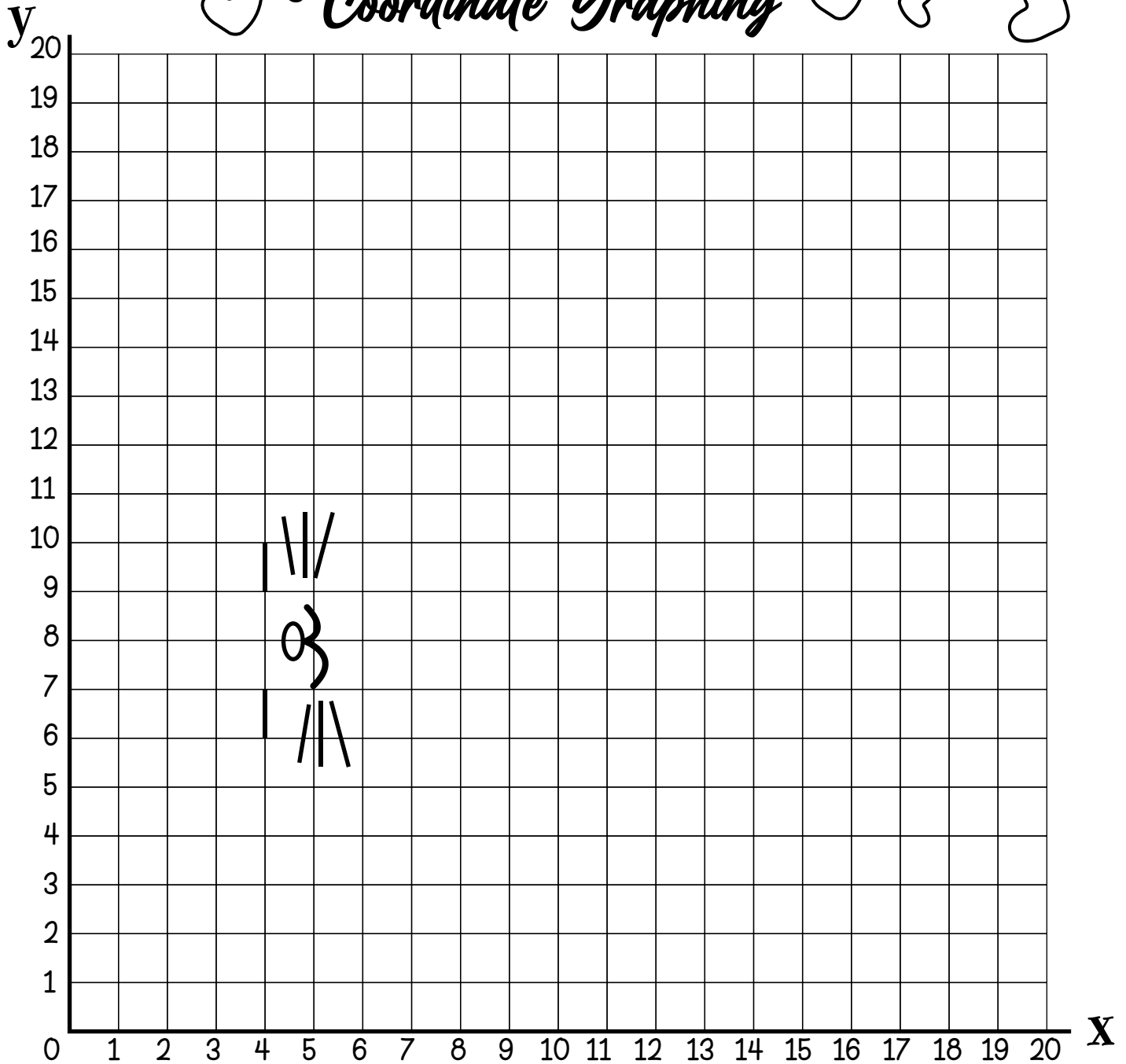



Shape 1	Shape 2	Shape 3	Shape 4	Shape 6	Shape 8	Shape 9	Shape 10	Shape 11
(13,8)	(14,13)	(6,13)	(13,5,9) (10,6) (6,5,9)	(15,4) (9,2)	(13,2)	(5,2)	(12,12) (9,12)	(7,5)
(14,10)	(15,13)	(5,13)	(16,6) (9,7)	(16,3) (8,1)	(15,2)	(7,2)	(12,11) (9,11)	(10,4)
(14,13)	(16,14)	(4,14)	(16,5) (8,7)	(16,2) (5,1)	(15,3)	(7,3)	(11,11) (11,11)	(13,5)
(12,15)	(16,15)	(4,15)	(15,4) (7,6)	(15,1) (4,2)	(13,3)	(5,3)	(11,10) (11,12)	
(8,15)	(15,16)	(5,16)	(13,4) (7,4)	(12,1) (4,3)	(13,2)	(5,2)	(9,10) (12,12)	
(6,13)	(13,16)	(7,16)	(13,6) (5,4)	(11,2) (5,4)			(9,11)	
(6,10)	(12,15)	(8,15)	(12,7) (4,5)	(11,3)			(8,11)	
(7,8)			(11,7) (4,6)	(9,3)			(8,12)	

Name: \_\_\_\_\_

# VALENTINE'S DAY

## Coordinate Graphing

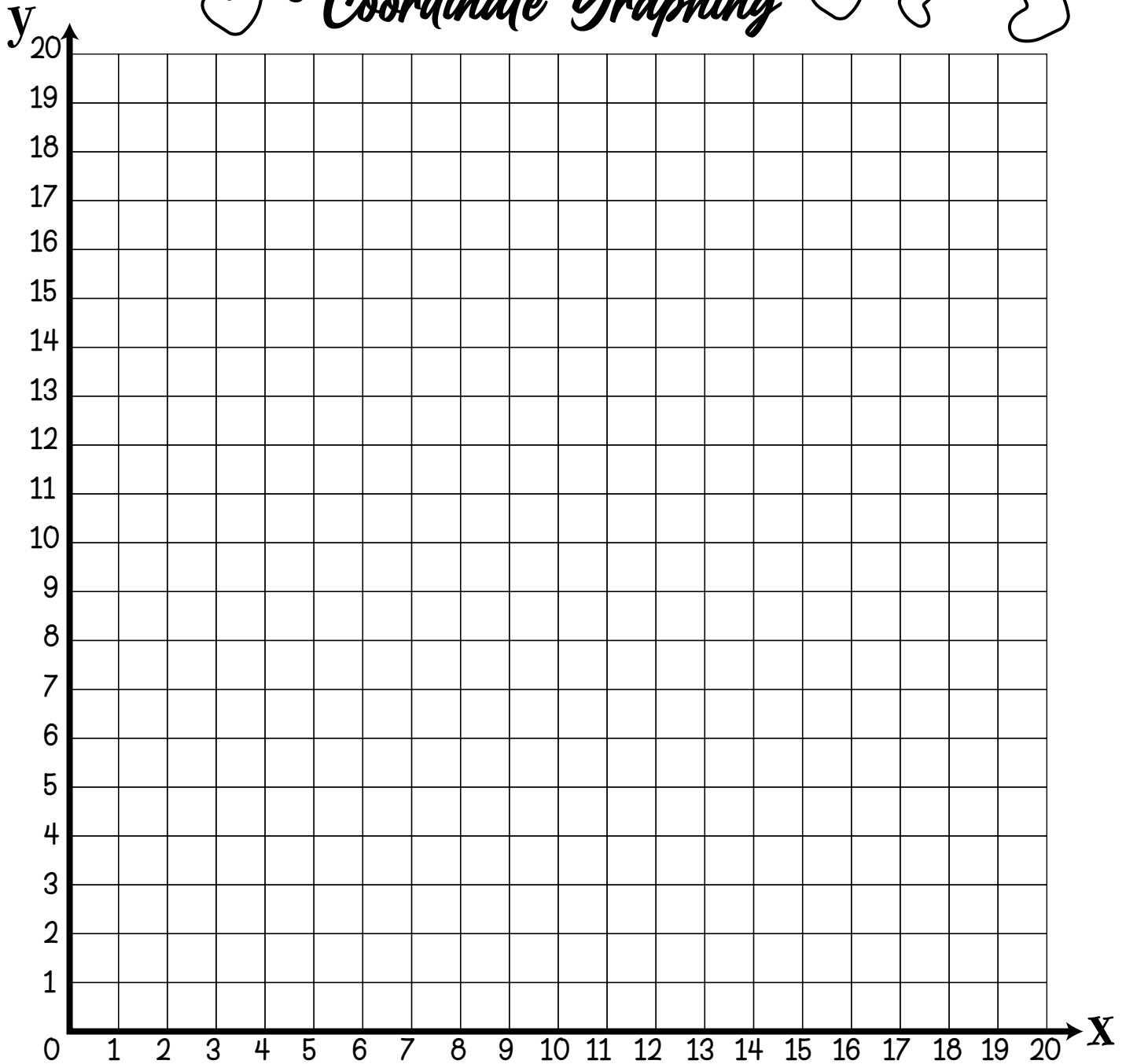



Shape 1			Shape 2		Shape 3		Shape 5	
(7,8)	(17,12)	(3,5)	(7,8)	(11,13)	(3,5)	(2,9)		
(6,7)	(15,14)	(7,5)	(9,6)	(9,14)	(1,5)	(1,10)		
(6,6)	(13,15)		(14,6)	(7,13)	(1,6)	(1,11)		
(7,5)	(8,15)		(16,8)	(6,11)	(2,7)	(3,11)		
(10,4)	(6,14)		(16,10)	(7,8)				
(15,4)	(3,11)		(14,12)					
(18,7)	(2,9)		(12,12)					
(18,10)	(2,7)		(11,11)					

Name: \_\_\_\_\_

# VALENTINE'S DAY

## Coordinate Graphing

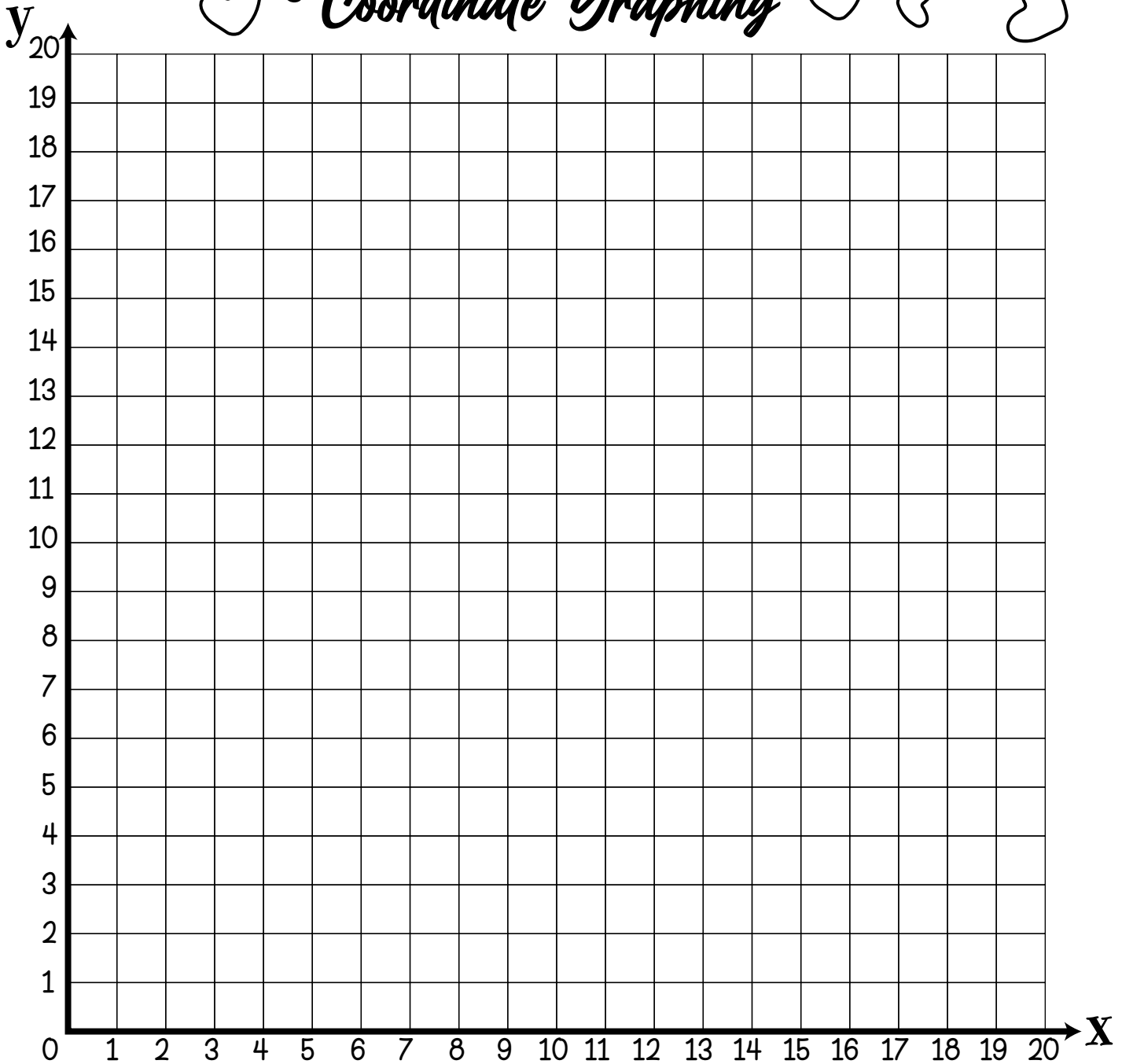



Shape 1	Shape 2	Shape 3	Shape 4	Shape 5	Shape 6	Shape 7
(12,4)	(4,12)	(5,11)	(10,6)	(14,7) (8,12)	(15,9) (17,17)	(5,13)
(2,12)	(5,11)	(5,8)	(9,5)	(15,7) (7,11)	(15,10) (12,12)	(6,13)
(2,13)	(7,11)	(7,6)	(9,4)	(15,8) (7,10)	(17,11)	(6,14)
(3,14)	(8,12)	(11,6)	(10,3)	(16,8) (9,8)	(17,12)	(5,14)
(4,14)	(9,12)	(11,7)	(14,3)	(16,9) (12,8)	(16,12)	(5,13)
(4,12)	(6,15)	(12,8)	(14,7)	(14,9)	(16,13)	
	(4,15)		(13,8)	(14,10)	(18,15)	
			(12,8)	(12,12)	(18,17)	

Name: \_\_\_\_\_

# VALENTINE'S DAY

## Coordinate Graphing

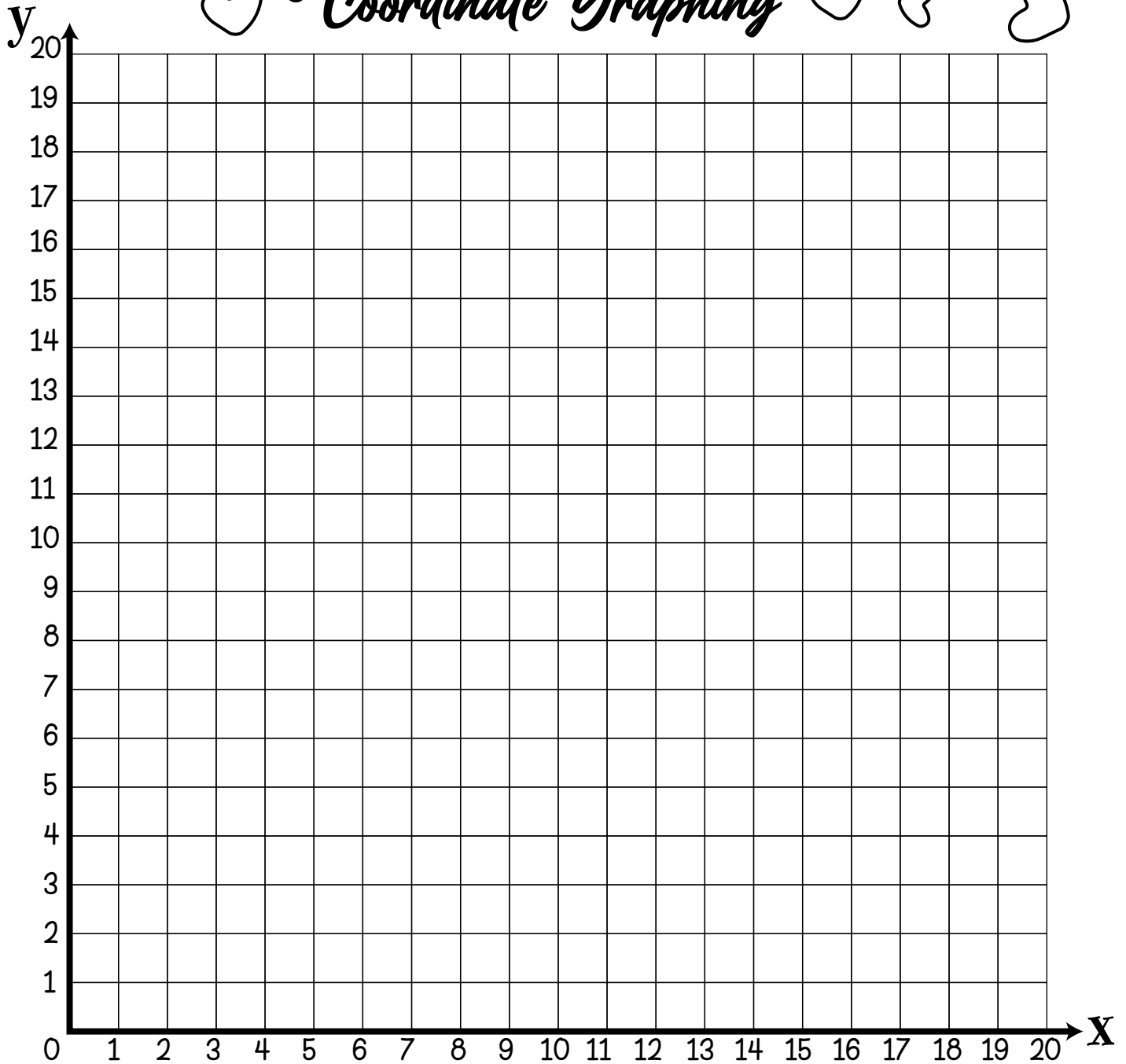



Shape 1	Shape 2	Shape 3	Shape 4	Shape 5	Shape 6	Shape 7	Shape 8	Shape 9	Shape 10
(8,1)	(11,4)	(11,6) (12,7)	(10,6) (9,7)	(11,8)	(11,9) (8,9)	(12,9) (11,13)	(14,14)	(12,13)	(12,15)
(13,1)	(11,8)	(13,6) (11,7)	(8,6) (10,7)	(12,9)	(11,13) (9,9)	(13,9)	(14,15)	(12,14)	(11,17)
(14,3)	(10,8)	(13,7)	(8,7)	(9,9)	(9,13)	(15,11)	(15,15)	(10,14)	(10,17)
(14,4)	(10,4)	(14,6)	(7,6)	(10,8)	(8,14)	(15,13)	(15,16)	(8,16)	(9,15)
(7,4)		(15,6)	(6,6)		(5,14)	(16,13)	(13,16)	(6,16)	
(7,3)		(15,7)	(6,7)		(5,13)	(16,14)	(11,14)	(6,15)	
(8,1)		(14,8)	(7,8)		(6,13)	(13,14)		(7,15)	
		(12,8)	(9,8)		(6,11)	(12,13)		(7,14)	

Name: \_\_\_\_\_

# VALENTINE'S DAY

## Coordinate Graphing

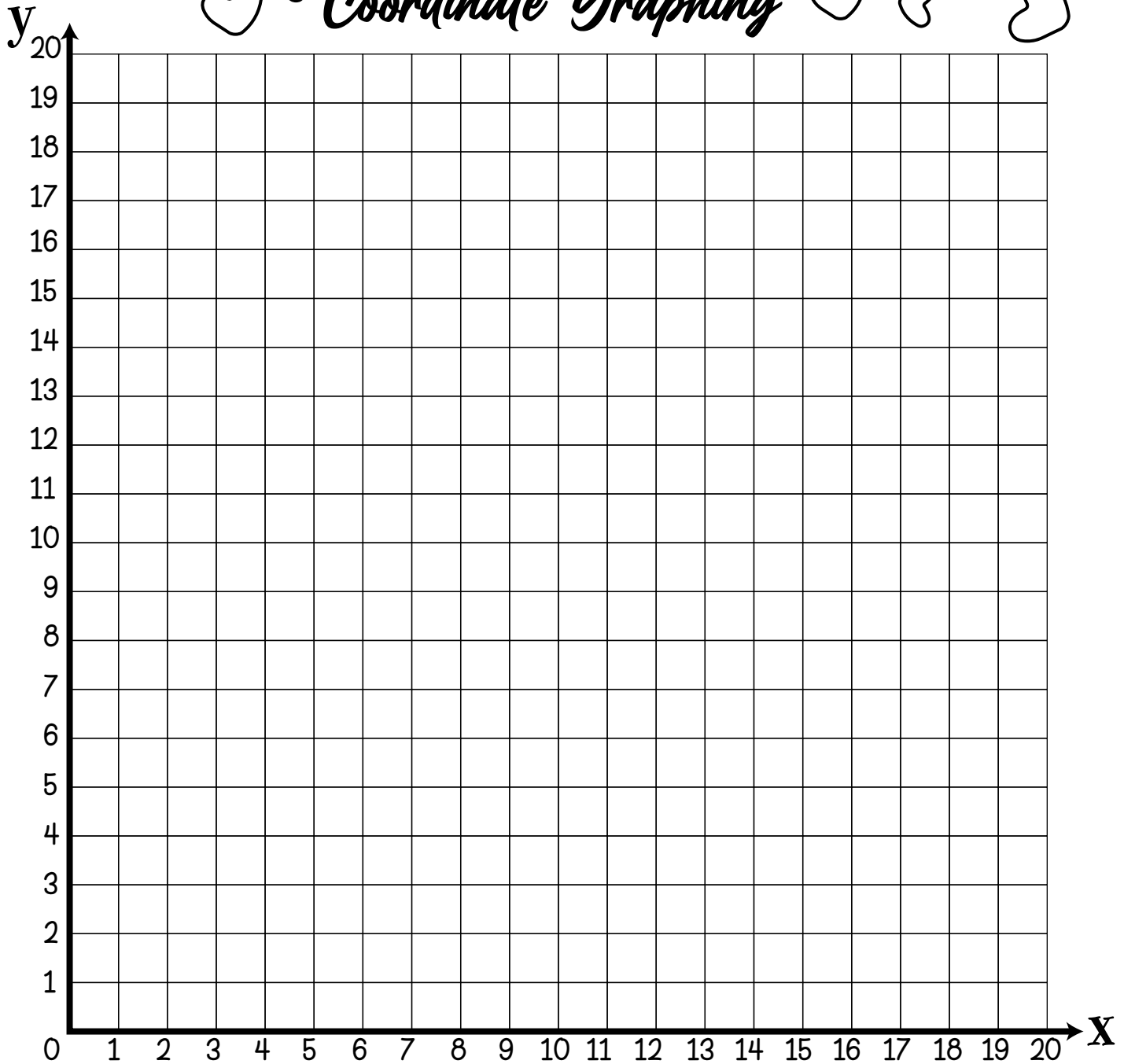



Shape 1	Shape 2	Shape 3	Shape 5
(5,7)	(5,7)	(9,8)	(14,8)
(4,6)	(9,11)	(12,8)	(17,9)
(5,8)	(5,11)	(11,6)	(15,11)
(4,7)	(6,7)	(11,8)	(14,7)
(3,8)	(8,11)	(11,11)	(18,9)
(5,7)	(4,11)	(12,6)	(18,10)
	(6,6)	(11,11)	(15,6)
	(8,12)	(10,11)	(17,10)
	(4,8)	(14,8)	(17,6)
	(7,6)	(10,12)	(18,7)
	(7,12)	(13,12)	(18,8)
	(7,11)	(9,12)	(18,12)
	(8,7)	(9,11)	(17,8)
	(6,11)	(12,11)	(15,12)
	(8,8)		
	(6,12)		
	(9,8)		
	(5,12)		

Name: \_\_\_\_\_

# VALENTINE'S DAY

## Coordinate Graphing

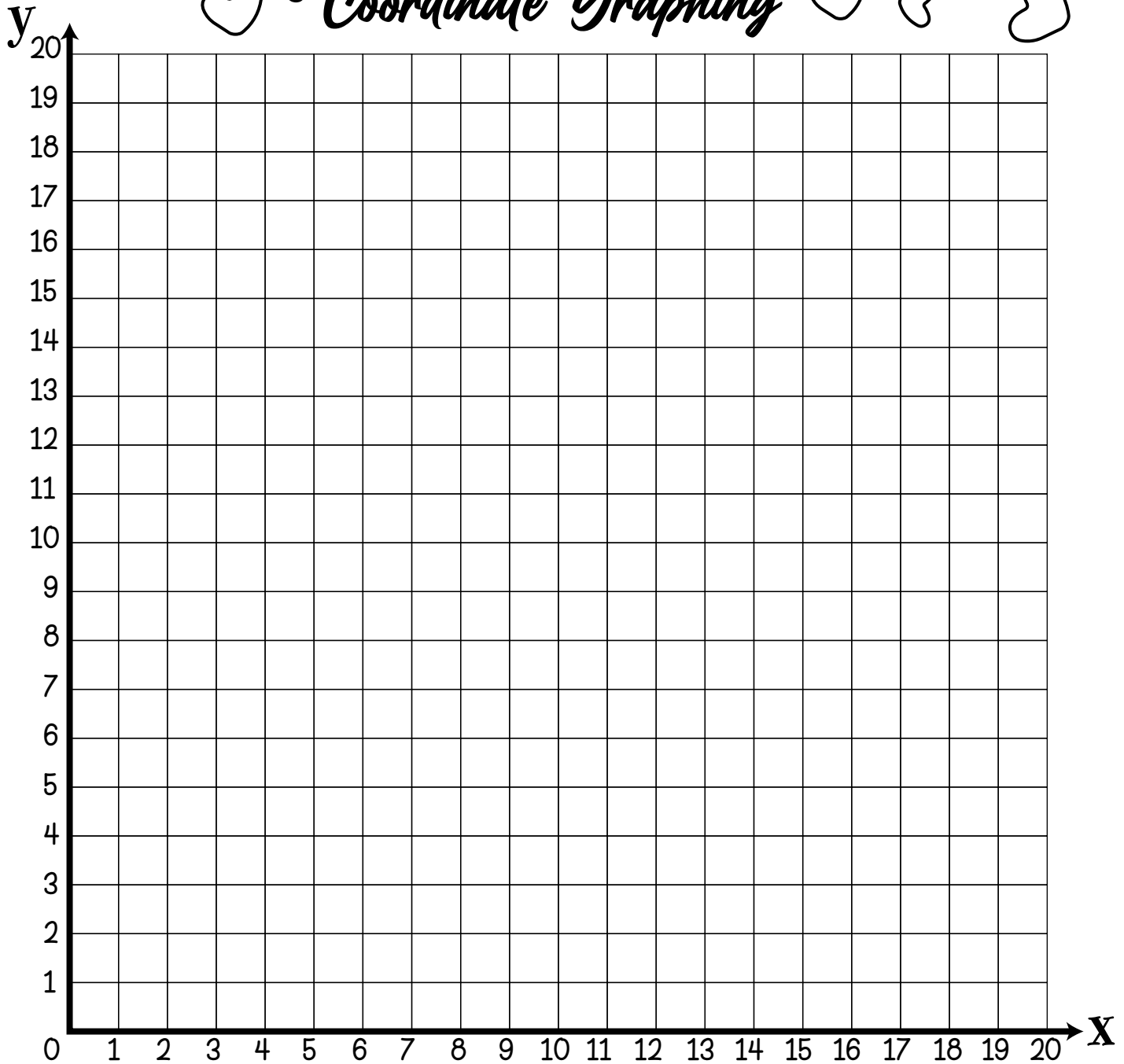


Shape 1	Shape 2	Shape 3
(4,3)	(4,10) (12,6)	(8,7) (12,9)
(17,3)	(8,7) (12,7)	(8,8) (12,8)
(17,10)	(9,7) (13,7)	(9,8) (12,8)
(14,14)	(9,6) (17,10)	(9,9)
(7,14)	(10,6) (4,10)	(10,9)
(4,10)	(10,5)	(10,8)
(4,3)	(11,5)	(11,8)
	(11,6)	(11,9)

Name: \_\_\_\_\_

# VALENTINE'S DAY

## Coordinate Graphing



Shape 1	Shape 2	Shape 3	Shape 4	Shape 5
(4,4) (8,11) (5,7)	(9,4)	(11,8)	(11,12) (11,14)	(14,5,14) (14,19)
(12,4) (8,10) (5,9)	(9,5)	(12,8)	(12,12) (10,14)	(18,16) (12,19)
(14,5) (7,9) (4,9)	(11,7)	(12,9)	(12,13) (10,13)	(18,18) (12,18)
(14,9) (7,8) (4,8)	(14,7)	(11,9)	(13,13) (11,13)	(17,18) (11,18)
(13,9) (6,8) (3,9)		(11,8)	(13,14) (11,12)	(17,19) (11,16)
(13,10) (6,6) (1,9)			(12,14)	(15,19) (14,5,14)
(12,10) (4,6) (1,7)			(12,13)	(15,18)
(12,11) (4,7) (4,4)			(11,13)	(14,18)